

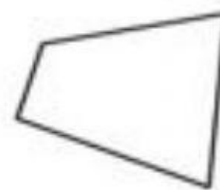
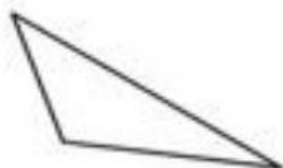
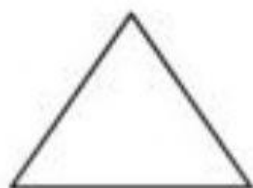
**Challenge 1:** Fill in the blanks.

a : Regular shapes have \_\_\_\_\_ sides.

b : Irregular shapes have \_\_\_\_\_ sides.

**Challenge 2:** Label these shapes. Choose the names from the box.

Square	Irregular Triangle	Irregular Pentagon	Regular Hexagon
Triangle	Regular Pentagon	Irregular Square	Irregular Hexagon

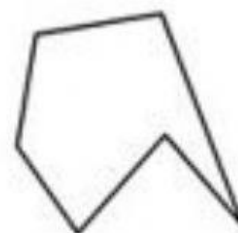
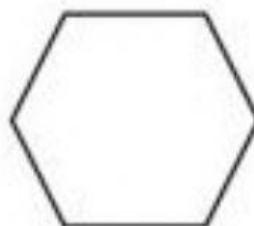
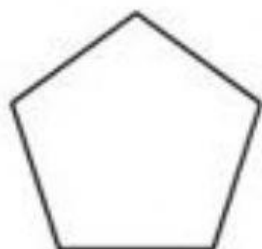


\_\_\_\_\_

\_\_\_\_\_

\_\_\_\_\_

\_\_\_\_\_



\_\_\_\_\_

\_\_\_\_\_

\_\_\_\_\_

\_\_\_\_\_

**Challenge 3:**

A. What size of turn is a right angle ? \_\_\_\_\_

B. What size of turn are 2 right angle ? \_\_\_\_\_

C. What size of turn are 3 right angle ? \_\_\_\_\_

D. What size of turn are 4 right angle ? \_\_\_\_\_