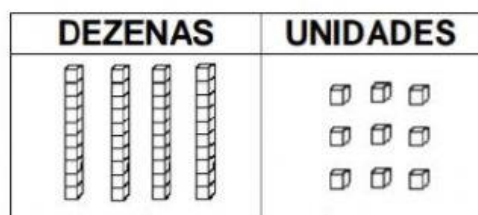
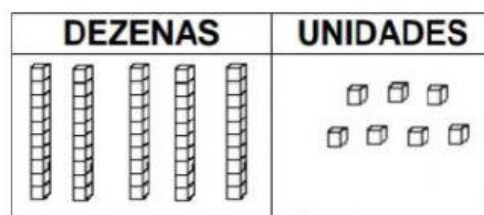


OBSERVE AS PEÇAS DO MATERIAL DOURADO E ESCREVA NOS QUADRADINHOS QUANTAS UNIDADES ELES REPRESENTAM COMO NO EXEMPLO:



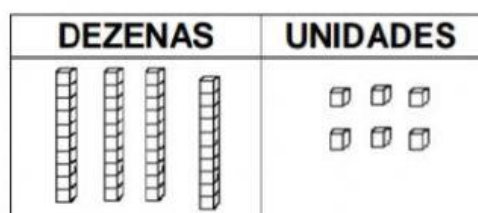
$$\boxed{40} + \boxed{9} = \boxed{4} \boxed{9}$$

Escreita por extenso  
QUARENTA E NOVE



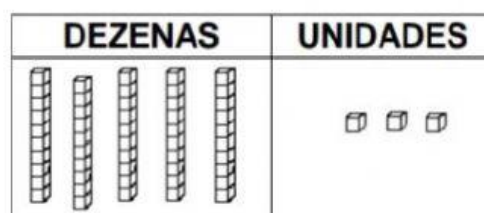
$$\boxed{\phantom{00}} + \boxed{\phantom{00}} = \boxed{\phantom{00}} \boxed{\phantom{00}}$$

Escreita por extenso



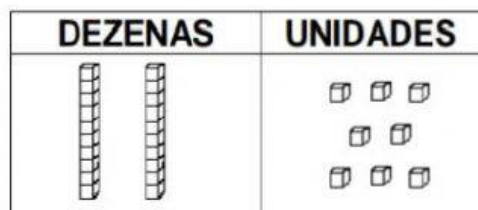
$$\boxed{\phantom{00}} + \boxed{\phantom{00}} = \boxed{\phantom{00}} \boxed{\phantom{00}}$$

Escreita por extenso



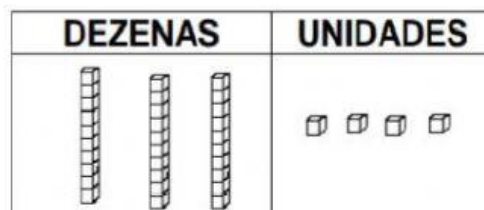
$$\boxed{\phantom{00}} + \boxed{\phantom{00}} = \boxed{\phantom{00}} \boxed{\phantom{00}}$$

Escreita por extenso



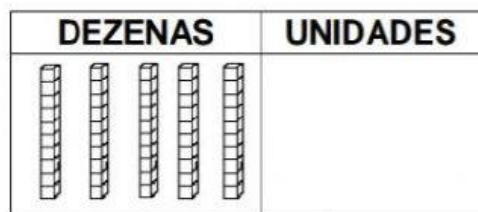
$$\boxed{\phantom{00}} + \boxed{\phantom{00}} = \boxed{\phantom{00}} \boxed{\phantom{00}}$$

Escreita por extenso



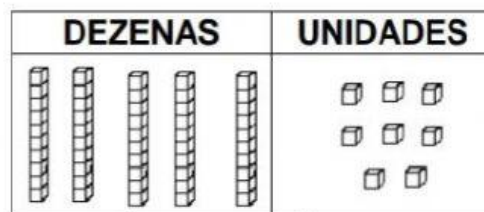
$$\boxed{\phantom{00}} + \boxed{\phantom{00}} = \boxed{\phantom{00}} \boxed{\phantom{00}}$$

Escreita por extenso



$$\boxed{\phantom{00}} + \boxed{\phantom{00}} = \boxed{\phantom{00}} \boxed{\phantom{00}}$$

Escreita por extenso



$$\boxed{\phantom{00}} + \boxed{\phantom{00}} = \boxed{\phantom{00}} \boxed{\phantom{00}}$$

Escreita por extenso