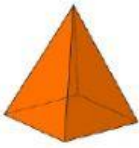
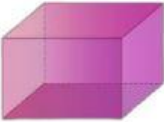

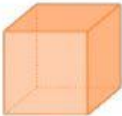




SOLID FIGURES

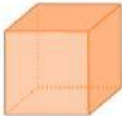
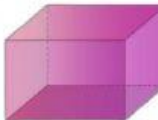
HOMEWORK

4/12/2021

Directions: Match the correct solid figure to its name.

- | | | | | |
|----|---|-----------------------|-----------------------|-------------------|
| 1. |  | <input type="radio"/> | <input type="radio"/> | Cube |
| 2. |  | <input type="radio"/> | <input type="radio"/> | Sphere |
| 3. |  | <input type="radio"/> | <input type="radio"/> | Rectangular Prism |
| 4. |  | <input type="radio"/> | <input type="radio"/> | Square Pyramid |
| 5. |  | <input type="radio"/> | <input type="radio"/> | Cone |
| 6. |  | <input type="radio"/> | <input type="radio"/> | Cylinder |

Directions: Match the characteristics to the correct solid figure.

- | | | | | |
|----|---|-----------------------|-----------------------|---|
| 7. | 6 Faces
Faces are made up of squares
12 Edges
8 Vertices | <input type="radio"/> | <input type="radio"/> |  |
| 8. | 0 Faces
Face has no shape
0 Edges
0 Vertices | <input type="radio"/> | <input type="radio"/> |  |

9. 6 Faces
Faces are made up rectangles
12 Edges
8 Vertices



10. 5 Faces
Faces are made up a square/triangles
8 Edges
5 Vertices

