

Nome: \_\_\_\_\_ Turma: \_\_\_\_\_



		
cubinho 1 unidade 1	barra 1 dezena 10	placa 1 centena 100

Classe das Unidades Simples		
3ª ordem	2ª ordem	1ª ordem
Centena	Dezena	Unidade

@DIARODATIAMARI

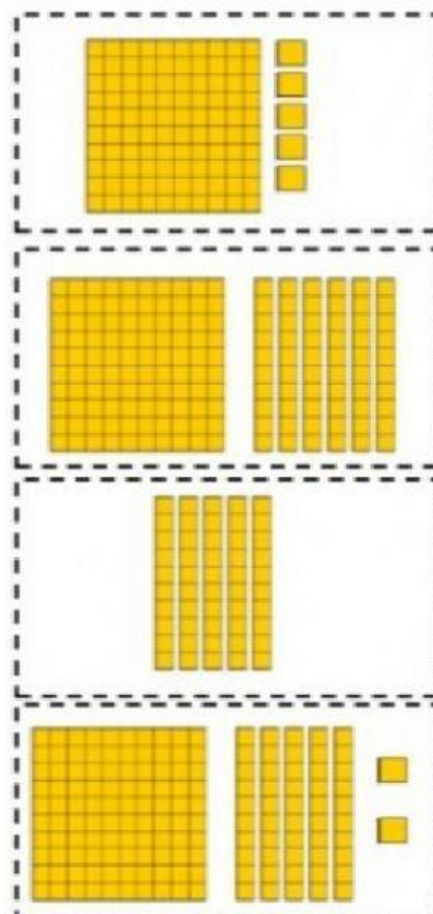
1 ARRASTE O MATERIAL DOURADO PARA OS VALORES CORRESPONDENTES:

152 ➡


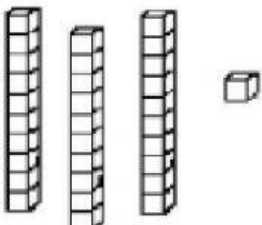





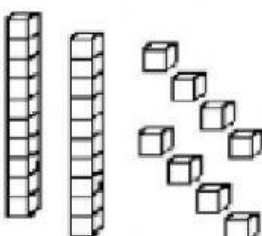


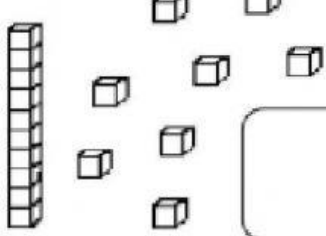





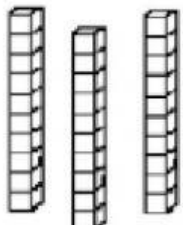


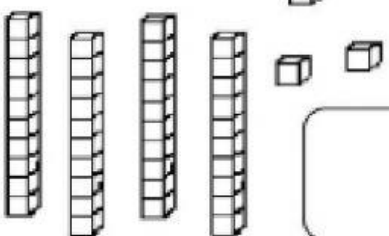


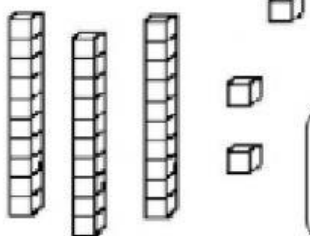

160 ➡

40 ➡

105 ➡



- 2** OBSERVE A QUANTIDADE DE PEÇAS DE MATERIAL DOURADO QUE ALGUMAS CRIANÇAS CONSEGUIRAM JUNTAR DURANTE UM JOGO. ESCREVA NO QUADRADO O NÚMERO FORMADO POR CADA CRIANÇA.

 <p><b>MARIA</b></p>  	 <p><b>GABRIEL</b></p>  
 <p><b>SAMUEL</b></p>  	 <p><b>HÉLEN</b></p>  
 <p><b>BRUNA</b></p>  	 <p><b>ANNY</b></p>  
 <p><b>EDUARDO</b></p>  	 <p><b>JÚLIA</b></p>  

- 3** AGORA RESPONDA DE ACORDO COM VALORES ENCONTRADOS NO EXERCÍCIO 2.

QUAL É A CRIANÇA QUE CONSEGUIU JUNTAR O MAIOR VALOR?

QUAL É A CRIANÇA QUE CONSEGUIU JUNTAR O MENOR VALOR?

**4** COMPLETE O QUADRO. SIGA O EXEMPLO:

NÚMERO	QVL E MATERIAL DOURADO		COM ADIÇÃO	COM PALAVRAS
<b>65</b>	DEZENAS <b>6</b>	UNIDADES <b>5</b>	<b>60 + 5</b>	<b>SESSENTA E CINCO</b>
<b>75</b>	DEZENAS	UNIDADES		
<b>85</b>	DEZENAS	UNIDADES		
<b>95</b>	DEZENAS	UNIDADES		
<b>68</b>	DEZENAS	UNIDADES		
<b>78</b>	DEZENAS	UNIDADES		
<b>88</b>	DEZENAS	UNIDADES		


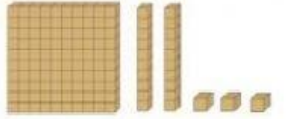


















**5** QUAL É O MAIOR NÚMERO APRESENTADO NO EXERCÍCIO ANTERIOR? MARQUE A RESPOSTA CORRETA.

**65** **75** **85** **95** **68** **78** **88**



6

REGISTRE AS QUANTIDADES REPRESENTADAS.

			
C    D    U	C    D    U	C    D    U	C    D    U
<input type="text"/>	<input type="text"/>	<input type="text"/>	<input type="text"/>
			
C    D    U	C    D    U	C    D    U	C    D    U
<input type="text"/>	<input type="text"/>	<input type="text"/>	<input type="text"/>
			
C    D    U	C    D    U	C    D    U	C    D    U
<input type="text"/>	<input type="text"/>	<input type="text"/>	<input type="text"/>
			
C    D    U	C    D    U	C    D    U	C    D    U
<input type="text"/>	<input type="text"/>	<input type="text"/>	<input type="text"/>
			
C    D    U	C    D    U	C    D    U	C    D    U
<input type="text"/>	<input type="text"/>	<input type="text"/>	<input type="text"/>