

NAMA

HARI

KELAS

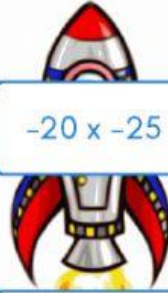
TANGGAL

ROCKET MATH

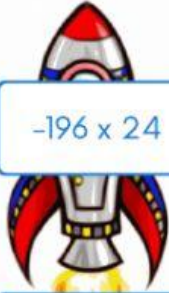
tuliskan hasilnya untuk meluncurkan roket



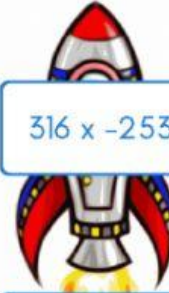
$$9 \times 12$$



$$-20 \times -25$$



$$-196 \times 24$$



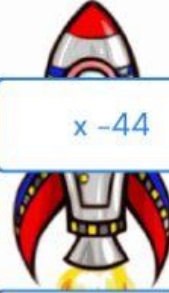
$$316 \times -253$$



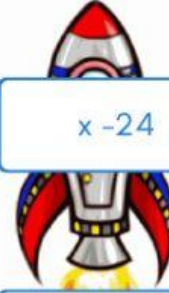
$$-3 \times$$



$$25 \times$$



$$\times -44$$



$$\times -24$$



$$-96 : 4$$



$$-252 : -14$$



$$13.244 : 86$$



$$90 : -2$$