



# Pakistan International School Jeddah - English Section

Final Term (2020-2021)

Year Reception - Science




Live worksheet

Name:

Class:

Date:

Look at the picture and select the correct state of matter.

		
<div>Solid</div>	<div>Solid</div>	<div>Solid</div>
<div>Liquid</div>	<div>Liquid</div>	<div>Liquid</div>
<div>Gas</div>	<div>Gas</div>	<div>Gas</div>

Fill in the blanks by using word bank.

Solid	liquid	gas
-------	--------	-----

1: The cup is an example of \_\_\_\_\_.

2: Milk is an example of \_\_\_\_\_.

3: Helium in balloon is an example of \_\_\_\_\_.

4: Pencil in my bag is an example of \_\_\_\_\_.

5: \_\_\_\_\_ can easily be poured.

6: Air we breathe in is \_\_\_\_\_.

7: Water in the glass is an example of \_\_\_\_\_.

