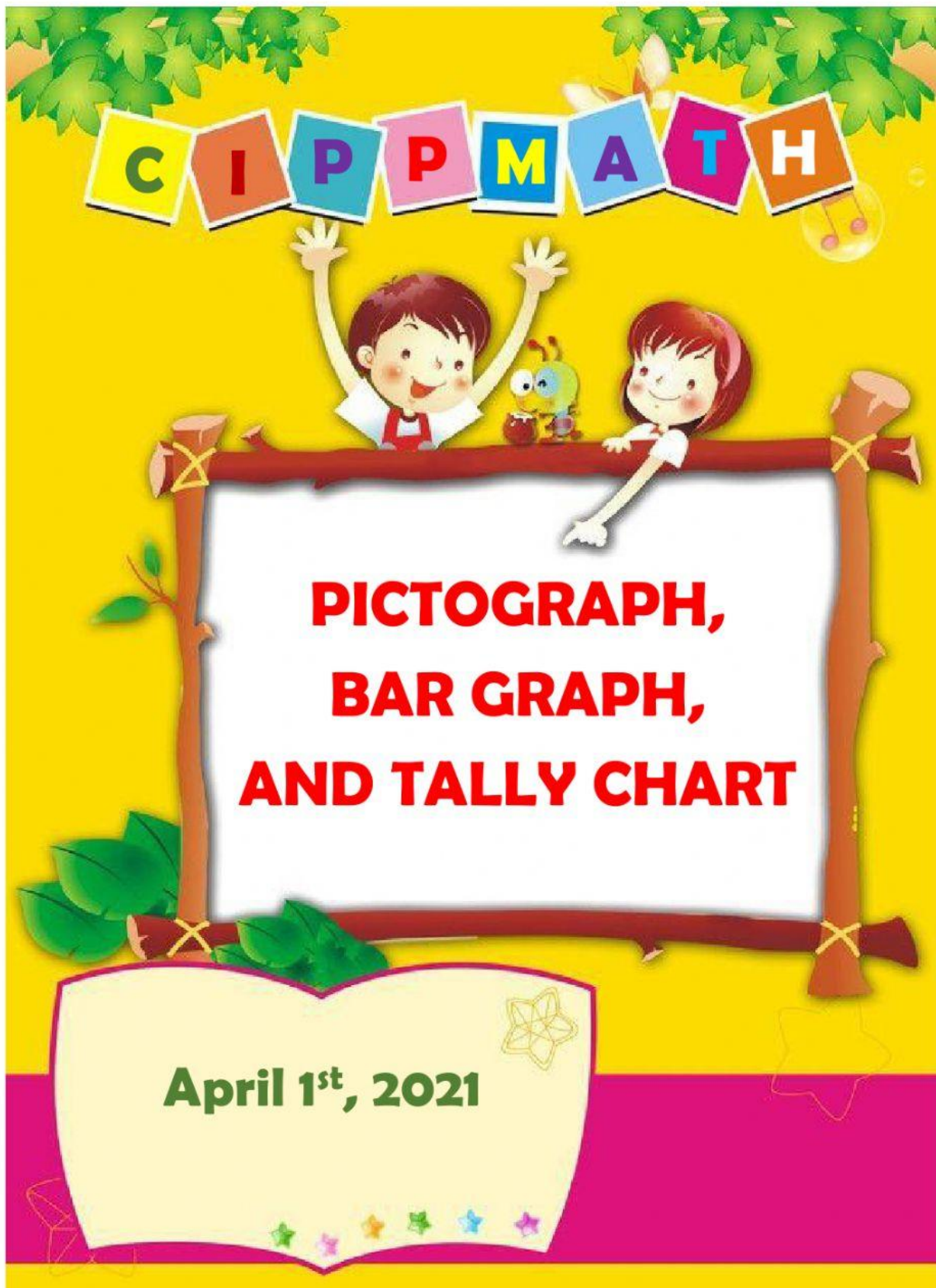


Nama : _____
Tanggal : _____



SD Tumbuh – Jogja Educational Spirit
Kelas : Lower B
Inquiry : Our Earth
Mata Pelajaran : CIPP Math


Teacher's feedback:

Nama : _____
Tanggal : _____


Hello my Lower B friends!

Today, we are going to learn about 3 different types of graphs.

They are pictograph, bar graph and tally chart. Although they have different form, but have same function. They are easy and quick to read. Let's take a look at this picture.



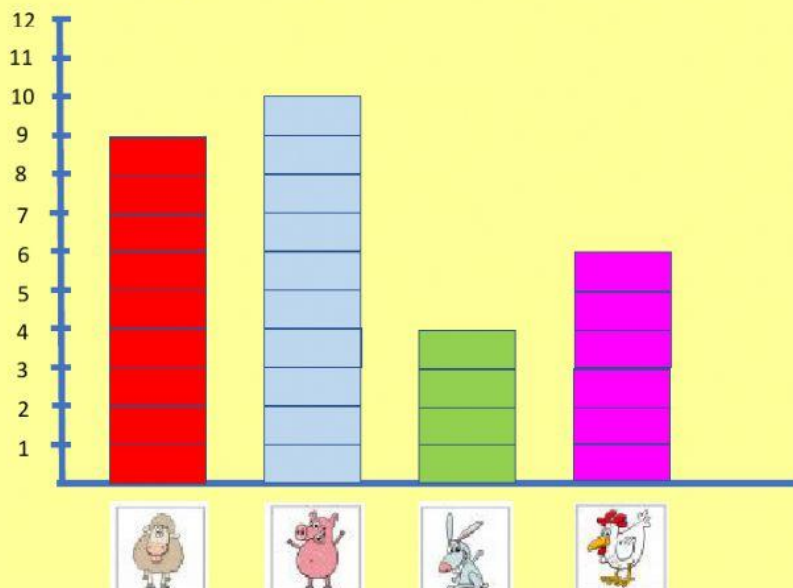
HOW MANY?



To solve this problem, we can use 3 types of graph.

1. BAR GRAPH

Use words/pictures, numbers and bars. Used to compare the data.



From this bar graph, we know that there are:.



9 sheeps



4 rabbits



10 pigs

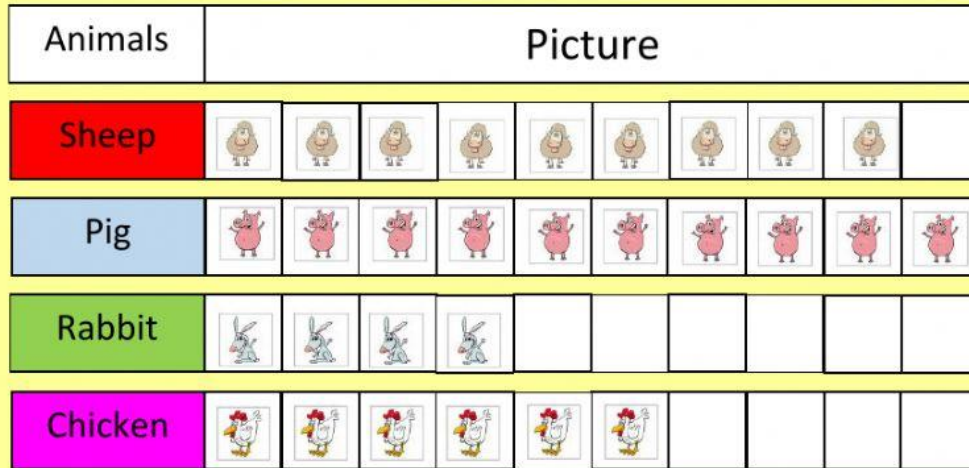


6 chickens

Nama : _____
Tanggal : _____

2. PICTOGRAPH

Share data in picture form.



From this pictograph, we know that there are:



9 sheeps



4 rabbits



10 pigs



6 chickens

3. TALLY CHART

Use words and tally chart.



From this tally chart, we know that there are:



9 sheeps



4 rabbits



10 pigs




6 chickens

Nama : _____
 Tanggal : _____

EXERCISE:

Drop and drag the pictures of transportations and make pictograph and tally chart. Answer the questions.




PICTOGRAPH

School Transportation	Picture									
Bike										
Bus										
Car										
Walk										


TALLY CHART

Bike	
Bus	
Car	
Walk	



Nama : _____
Tanggal : _____

From that graph we know that:



1. How many people walk to school?

2. How many people ride their bike?

3. Which transport type is most popular?

4. Which transport type is least popular?
