
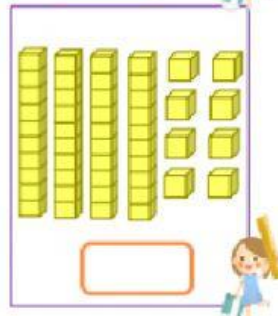

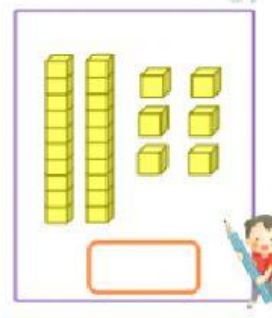
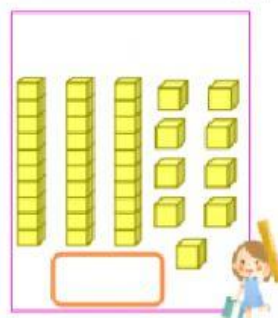
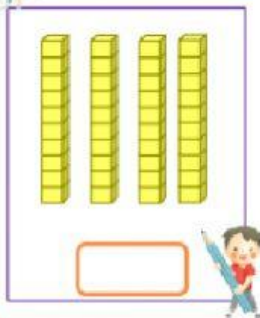
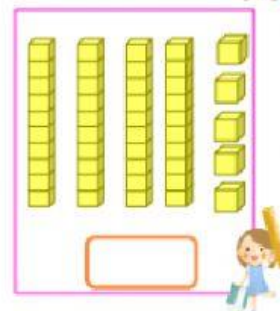
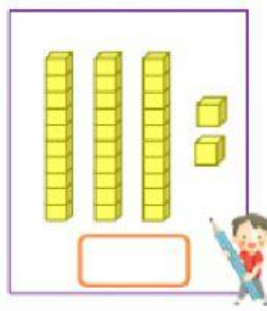
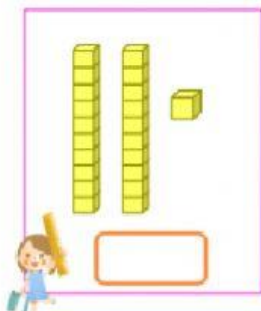
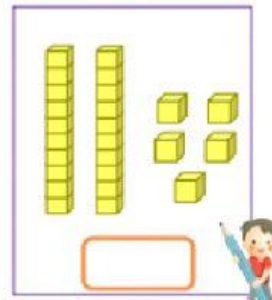
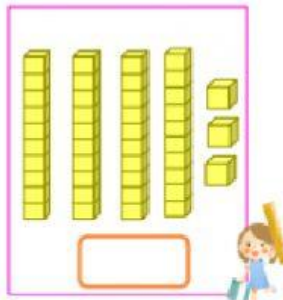
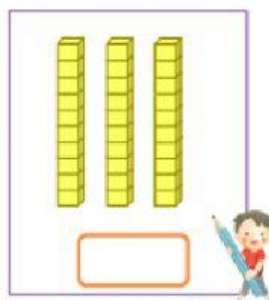


Nome do aluno: \_\_\_\_\_ Turma: \_\_\_\_\_

Profe: Rejane Quadros

1- Complete os espaços com a valor representado pelo material dourado.



LIGUE O NÚMERO A SUA CORRETA DECOMPOSIÇÃO.

**250**

**$100 + 100 + 100 + 20$**

**180**

**$50 + 50 + 50 + 10$**

**400**

**$50 + 50 + 100 + 50$**

**160**

**$100 + 200 + 50 + 50$**

**320**

**$100 + 40 + 40$**