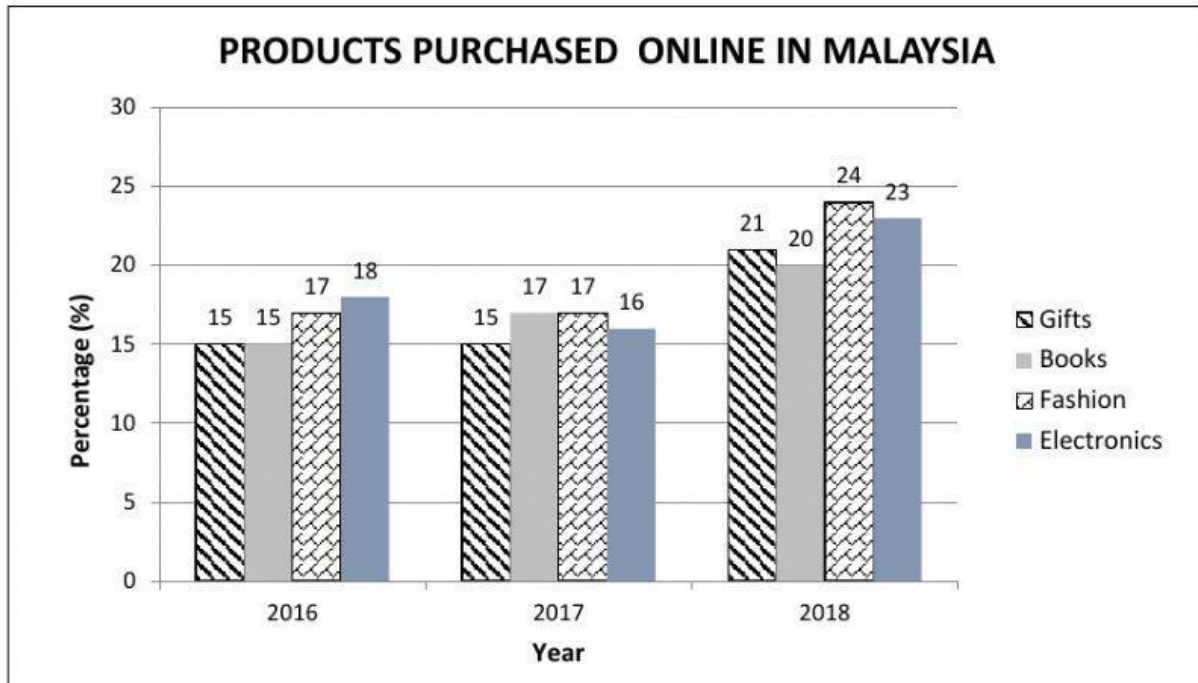


CLO 1: Present gathered data in graphs and charts effectively using appropriate language forms and functions.

PART A: MULTIPLE CHOICE QUESTIONS (10 MARKS)

Questions 1 - 5 are based on the bar chart below.

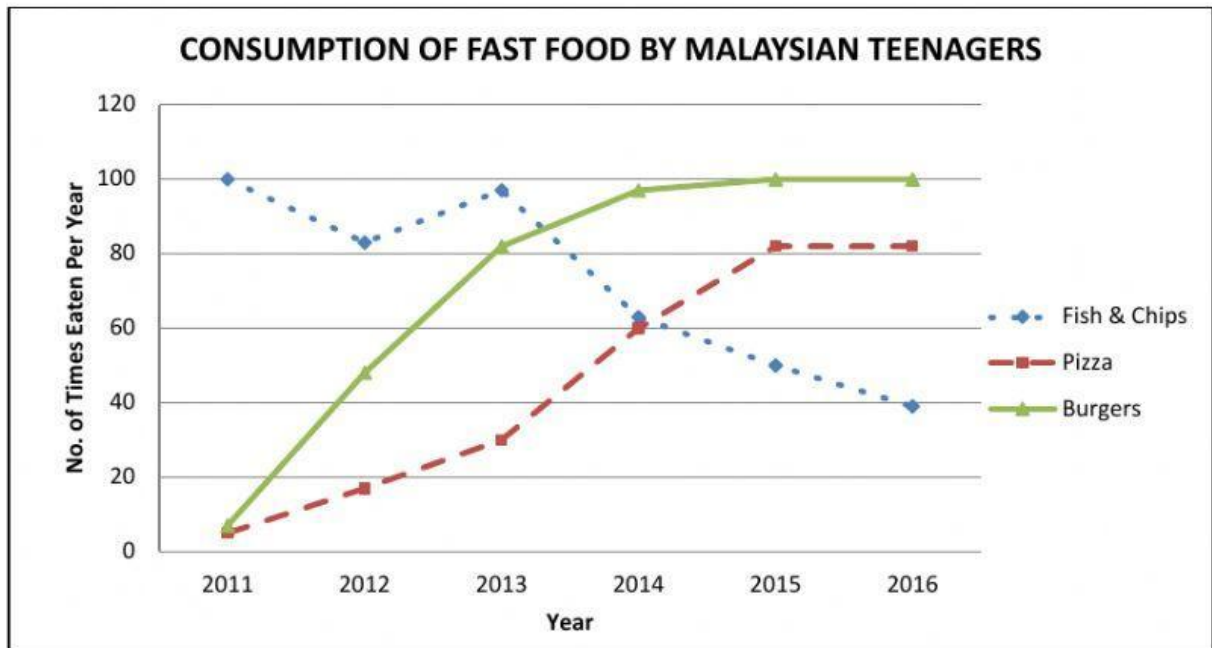
Instruction: Choose the best answer.



- How many variables are presented in the above bar chart?
A. 1
B. 2
C. 3
D. 4
- Which products recorded the same percentage of purchase for two consecutive years?
A. Fashion and gifts
B. Fashion and books
C. Gifts and books
D. Electronics and fashion
- The percentage of books purchased online _____ throughout the three years.
A. rocketed
B. rose gradually
C. remained steady
D. increased dramatically
- Which of the following **BEST** describes the Electronics purchase?
A. The percentage of electronics purchased online plummeted in 2017.
B. The percentage of electronics purchased online was more than gifts in 2016.
C. Electronics recorded the highest percentage of products purchased online in 2018.
D. There was a steady increase in the percentage of electronics purchased online from 2016 to 2018.
- Which of the following description is **TRUE** about the chart?
A. The lowest percentage of products purchased online in 2017 was fashion.
B. The percentage of products purchased online in 2016 was almost the same.
C. The percentage of electronic products purchased online rose by 8% in 2018.
D. The percentage of fashion and gift products showed similar trends from 2016 to 2018.

Questions 6 -10 are based on the line graph below.

Instruction: Choose the best answer.



6. X- axis is labeled as _____ in line graph above.
 - A. Types of fast food
 - B. Year of consumption
 - C. Number of teenagers
 - D. Number of times eaten per year

7. Which sentence **BEST** illustrates the title of line graph above?
 - A. Fast food preference of Malaysian teenagers from year 2011 to 2016.
 - B. Types of fast food taken by Malaysian teenagers from year 2011 to 2016.
 - C. Amount of fast food intake by Malaysian teenagers from year 2011 to 2016.
 - D. The most favourite fast food among Malaysian teenagers from year 2011 to 2016.

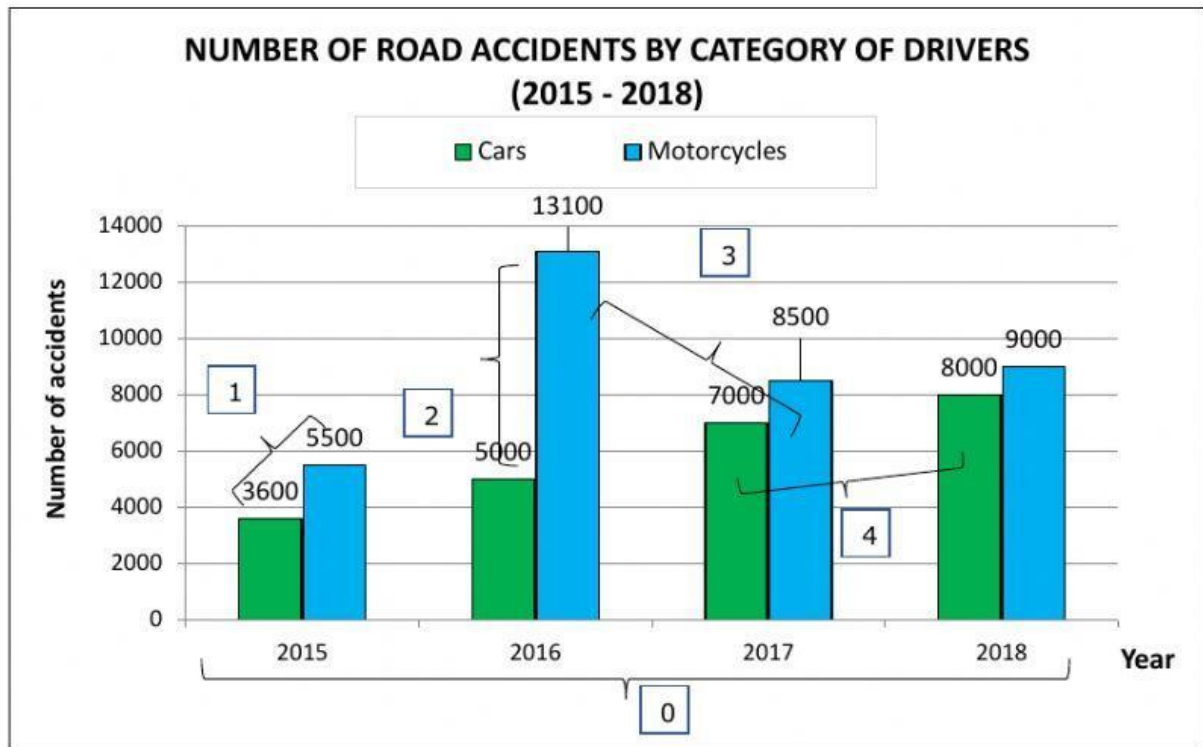
8. In year 2011, the consumption of fish and chips _____ 100 times a year compared to pizza and burgers with only 5 and 7 times per year.
 - A. stood at
 - B. expanded
 - C. fluctuated
 - D. maintained

9. Pizza consumption among teenagers showed a _____ from year 2011 to 2013.
 - A. quick rise
 - B. sharp growth
 - C. gradual increase
 - D. significant upward trend

10. Sentences below describe burgers consumption from 2011 to 2016 **EXCEPT** ...
 - A. Burgers consumption fluctuated from year 2013 to 2016.
 - B. Consumption of burgers remained steady from year 2015 to 2016.
 - C. There was an enormous rise in burgers consumption from year 2011 to 2013.
 - D. Burgers consumption showed a negligible upward trend from year 2014 to 2015.

PART B: STRUCTURED QUESTIONS (10 MARKS)

Instruction: Analyze the following bar chart. Rearrange the words to form 4 sentences to describe the different parts of the chart numbered 1, 2, 3 and 4.



Example: 0 - The horizontal axis represents the years from 2015 to 2018.

1 No.1: Compare & Contrast structure (2 Marks)

was car In 2015, marginally lower accidents by 1900 cases the number of than accidents. motorcycle
the number of

2 No.2: Compare & Contrast structure (2 Marks)

the number of In 2016, motorcycle was accidents enormously higher accidents. than the number of car
by 8100 cases

3 No.3: Verb + Adverb Structure (2 Marks)

in accidents to motorcycle 13100 cases The number of fell significantly 8500 cases 2017. from 2016 in

4 No.4: Adjective + Noun Structure (2 Marks)

a in the number of There was in car slight rise accidents by 2018. 1000 cases

No. 5: Opinion (2 Marks)

According to the chart, there was a significant increase in the number of road accidents. Choose **TWO** relevant suggestions on how to reduce the number of accidents in our country.

- A. Enforce the law and give harsh penalties to the offenders
- B. Reduce the selling of vehicles
- C. Hold a campaign to educate the road users every week
- D. Control the food intake
- E. Parents need to take the blame for their children