




## Location on a grid
















Look at the grid and then answer the question.

Which box is the bird in?

**B, 2**

2		
1		
	A	B

Look at the grid and then answer the questions below.

8								
7								
6								
5								
4								
3								
2								
1								
	A	B	C	D	E	F	G	H

Write where each of the animals can be found.

mouse	<input type="text"/>	elephant	<input type="text"/>	horse	<input type="text"/>
lion	<input type="text"/>	zebra	<input type="text"/>	tiger	<input type="text"/>
cat	<input type="text"/>	chicken	<input type="text"/>	pig	<input type="text"/>
cow	<input type="text"/>	goat	<input type="text"/>	whale	<input type="text"/>
crab	<input type="text"/>	butterfly	<input type="text"/>	sheep	<input type="text"/>