



1. Cuenta los animales de cada hilera.



2. Realiza las siguientes sumas siguiendo el valor de cada uno de ellos:



1



2



3



4




+




=



+



=



+



+



=




+



=




3. Relaciona cada grupo de animales con el número que hay de estos:




1



4



3



2



5