

LKPD

(Lembar Kerja Peserta Didik)

Nama : _____

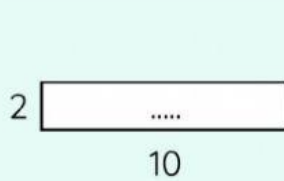
Kelas : 4 ____



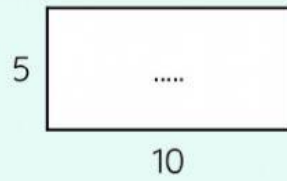
Ayo Menghitung

🕒 15 Menit

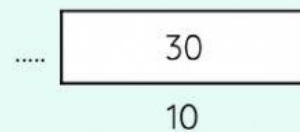
Isilah titik-titik berikut sesuai dengan luas bangun!




(1)



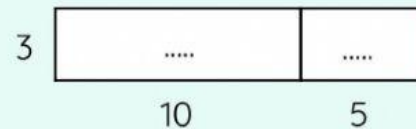
(2)




(3)




(4)



(5)



(6)



(7)