

**MATHEMATICS 5**  
4<sup>th</sup> Quarter Summative Test B  
SY 2020-2021

I. Choose the letter of the correct answer.

1. What is fifteen minutes after six o'clock?

a. 5:45

b. 6:15

c. 6:20

2. Where is the minute hand pointing to if it is 6:20 on the clock?

a. 8

b. 4

c. 2

3. How many minutes does it take when the minute hand moves from number 4 to number 6 on the clock?

a. 15

b. 5

c. 10

4. How many times in one day will the clock show 8:39?

a. Once

b. twice

c. thrice

5. If there are 60 minutes in 1 hour, how many minutes are there in 3 hours?



a. 120 minutes

b. 150 minutes


c. 180 minutes

II. Choose the clock that correctly shows the time in the box.




quarter to 5






half past 12





quarter past 8



quarter to 1



half past 10



III. A. Find the sum.

$$\begin{array}{r} 1\ 523 \\ + 4\ 182 \\ \hline \end{array}$$

$$\begin{array}{r} 282 \\ 363 \\ + 124 \\ \hline \end{array}$$

B. Find the difference.






















$$\begin{array}{r} 2\ 759 \\ - 359 \\ \hline \end{array}$$


$$\begin{array}{r} 3\ 000 \\ - 1\ 284 \\ \hline \end{array}$$

$$\begin{array}{r} 8\ 592 \\ - 3\ 479 \\ \hline \end{array}$$

IV. Study the pictograph below. Then, answer the questions below.

**Number of Fish Caught**

Michael	  
Emily	     
Jose	 
Jennifer	      
Kevin	  

 = 6 fish

1. How many fish did the girls catch? \_\_\_\_\_
2. How many fish did the boys catch? \_\_\_\_\_
3. How many more fish did Emily catch than Jose? \_\_\_\_\_
4. Who caught the greatest number of fish? \_\_\_\_\_
5. Did Jennifer catch an odd or even number of fish? \_\_\_\_\_

