
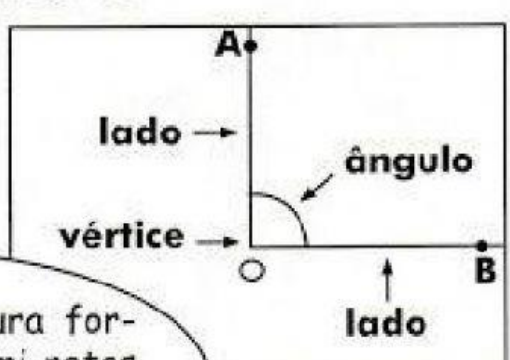


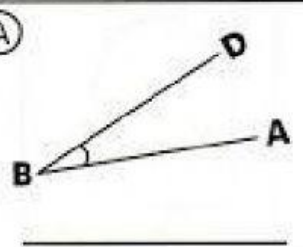
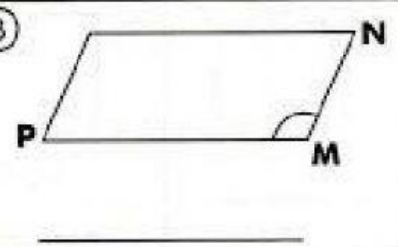
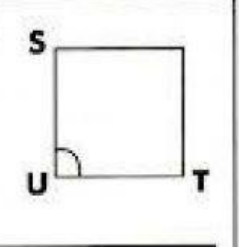
ÂNGULOS



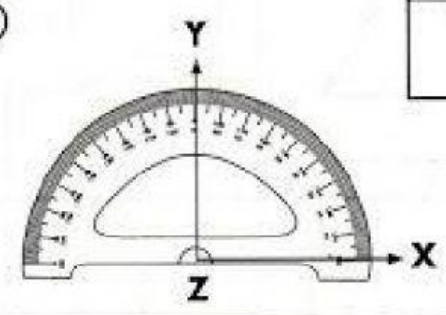
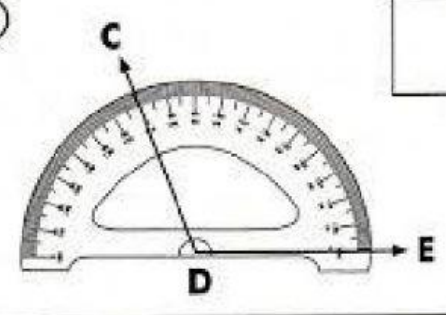
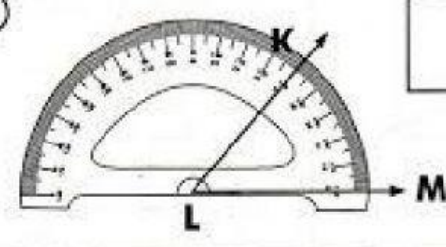
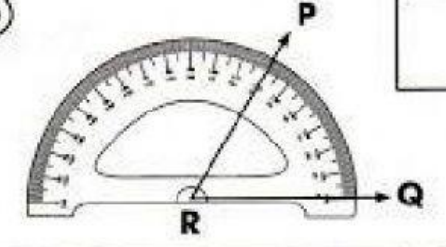
Ângulo é uma figura formada por duas semi-retas que têm a mesma origem. Veja!



Classifique os ângulos abaixo:

<p>(A)</p>  <p>_____</p>	<p>(B)</p>  <p>_____</p>	<p>(C)</p>  <p>_____</p>
--	---	--

Escreva a medida de cada ângulo marcado no transferidor.

<p>(A)</p>  <div style="float: right; border: 1px solid black; width: 50px; height: 50px; margin-top: 10px;"></div>	<p>(B)</p>  <div style="float: right; border: 1px solid black; width: 50px; height: 50px; margin-top: 10px;"></div>
<p>(C)</p>  <div style="float: right; border: 1px solid black; width: 50px; height: 50px; margin-top: 10px;"></div>	<p>(D)</p>  <div style="float: right; border: 1px solid black; width: 50px; height: 50px; margin-top: 10px;"></div>