




Adding 0, 1, and 2




Count and write the answer


1 $0 + 1 =$




2 $1 + 1 =$




3 $2 + 0 =$



4 $1 + 0 =$




5 $2 + 1 =$



6 $0 + 2 =$



7 $1 + 2 =$



8 $2 + 2 =$

9 $0 + 0 =$

10 $1 + 1 =$