

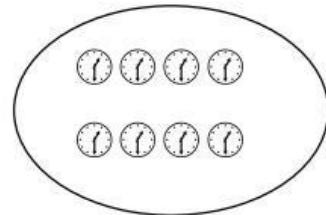
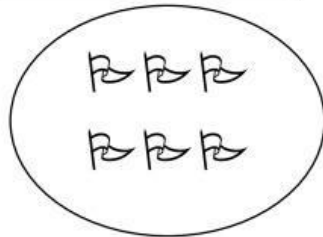


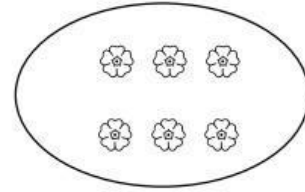
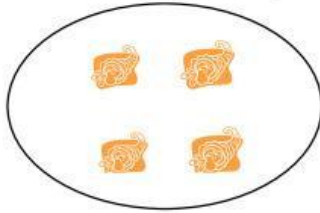


Họ và tên: .....

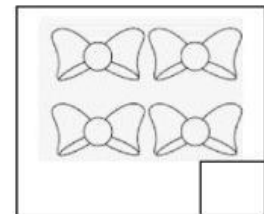






Lớp : 1A...

## PHIẾU TƯ DUY 8

**Bài 1:** Nối hình có số lượng bằng nhau.



**Bài 2:** Số?



**Bài 3:** Điền dấu >, <, = vào ô trống cho phù hợp.

3		6
---	--	---

9		7
---	--	---

6		6
---	--	---

8		4
---	--	---

0		2
---	--	---

5		8
---	--	---

**Bài 4:** a. Chọn số bé nhất trong các số sau:

7 ; 5 ; 9 ; 8 ; 0

b. Chọn số lớn nhất trong các số sau:

6 ; 2 ; 7 ; 4 ; 5