



Họ và tên:

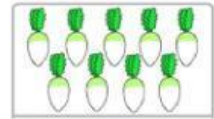
Lớp : A...

PHIẾU TƯ DUY 3

Bài 1: Nối hình với số cho phù hợp.




6




5



9



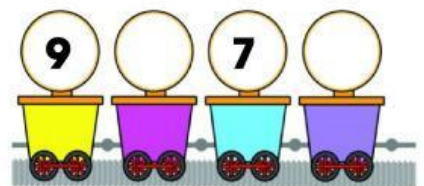
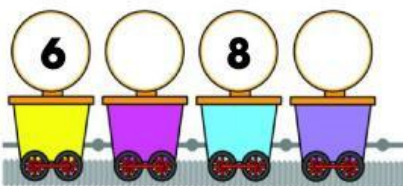
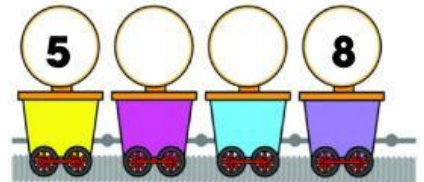
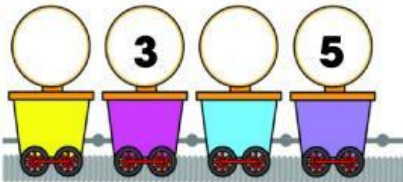
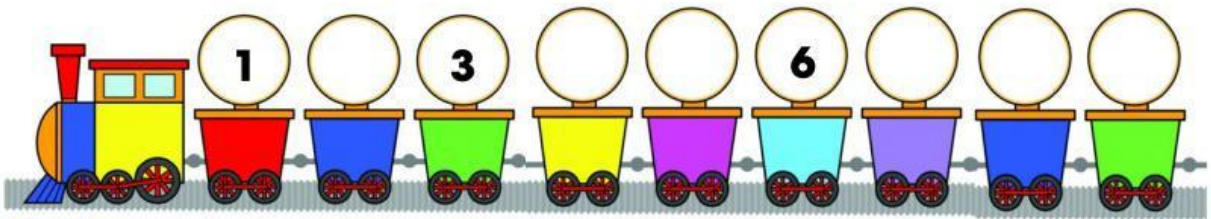
8






7




Bài 2: Số?



Bài 3: Chọn nhóm có số lượng nhiều nhất.



Bài 4: Chọn hình còn thiếu cho phù hợp.



5	3	2	4	1
4	5	1	3	2
3	2	5		4
2	1	4		
1	4	3		5

