

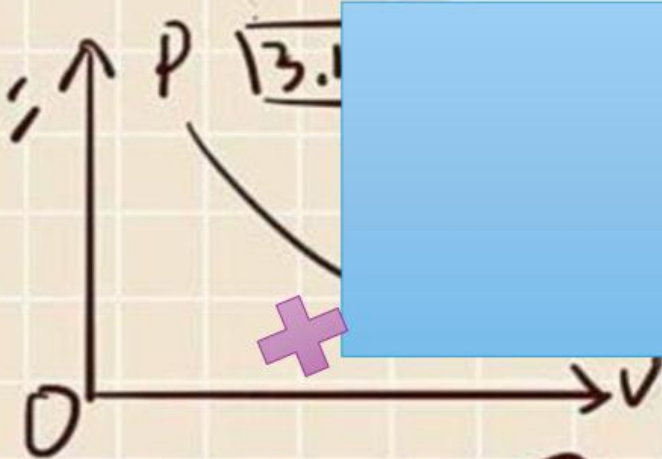
LKPD

Penjumlahan & Pengurangan

$$a+b=$$

$$b=(x^2+)$$

Perhatikan Video Berikut ini:



Perhatikan Presentasi Berikut ini:



$$a+b = (x_1 + x_2, y_1 + y_2)$$
$$a-b = (x_1 - x_2, y_1 - y_2)$$

$$\sin(\frac{\pi}{2} + \alpha) = \cos \alpha$$
$$\cos(\frac{\pi}{2} + \alpha) = -\sin \alpha$$

LKPD

Penjumlahan & Pengurangan

1 Text Field

Adit memiliki 5 buah permen lalu ayah memberikan adit 8 permen

Lagi untuk adit, berapa banyak permen yang adit punya?.....

2 Single Choice

Berapa hasil dari $12-5$?.....

3 Check Boxes

Pernyataan yang benar Adalah.....



Bilangan pengurangan (-)



Bilangan penjumlahan (+)



Bilangan penjumlahan (-)

4 Select

Hasil dari penjumlahan di bawah Adalah?



$$6 + 3 =$$

5

4

7

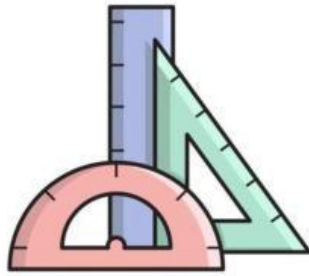
3

$$a+b = (x_1+x_2, y_1+y_2)$$

$$a-b = x_1x_2 + y_1y_2$$

$$\sin\left(\frac{\pi}{2} + a\right) = \cos a$$

$$\cos\left(\frac{\pi}{2} + a\right) = -\sin a$$



LKPD

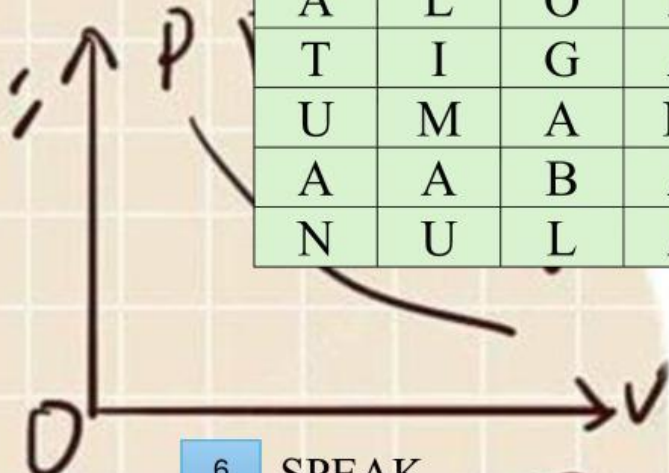
Penjumlahan & Pengurangan

$$a+b=$$

$$b = (a+b)$$


5 Word Search

S	A	T	E	T	U
A	L	O	N	U	K
T	I	G	A	J	P
U	M	A	M	U	C
A	A	B	A	H	H
N	U	L	A	A	R

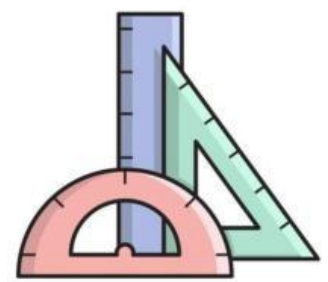


6 SPEAK

Sebutkan jawaban dari pengurangan tersebut!



$$10 - 8 =$$





$$b^2 \times \sqrt{2}$$

A 0 0

$$a = \lambda_1 e_1 + \lambda_2 e_2$$

$$x_1 y_2 - x_2 y_1 = 0$$



$$a+b = (x_1+x_2, y_1+y_2)$$

$$a-b = x_1 x_2 + y_1 y_2$$

$$\sin(\frac{\pi}{2} + a) = \cos a$$

$$\cos(\frac{\pi}{2} + a) = -\sin a$$

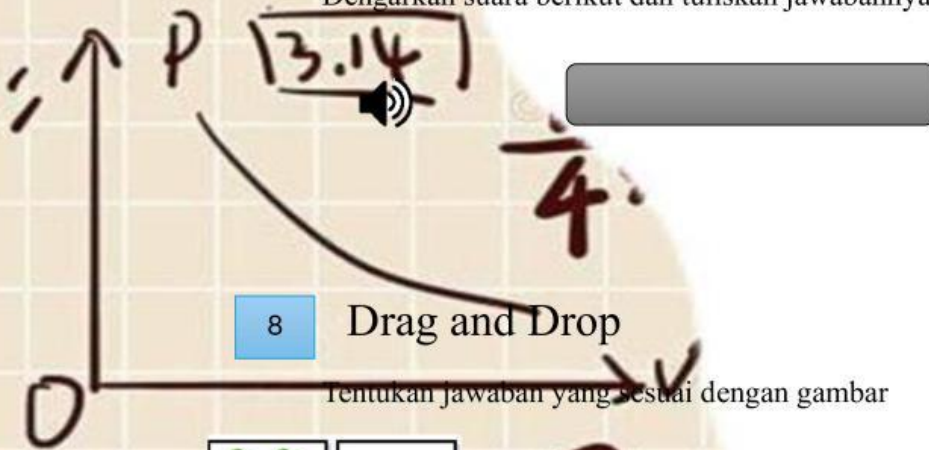


LKPD

Penjumlahan & Pengurangan


7 Listening

Dengarkan suara berikut dan tuliskan jawabannya dengan tepat!



8 Drag and Drop

Tentukan jawaban yang sesuai dengan gambar



$$4 + 2 =$$



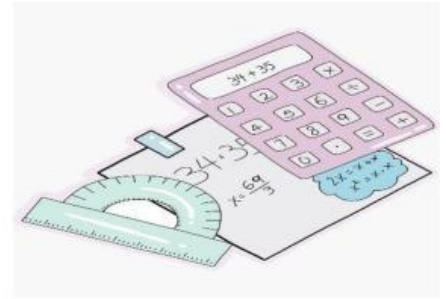
$$9 - 4 =$$



$$6 + 4 =$$

5
10
7

LKPD



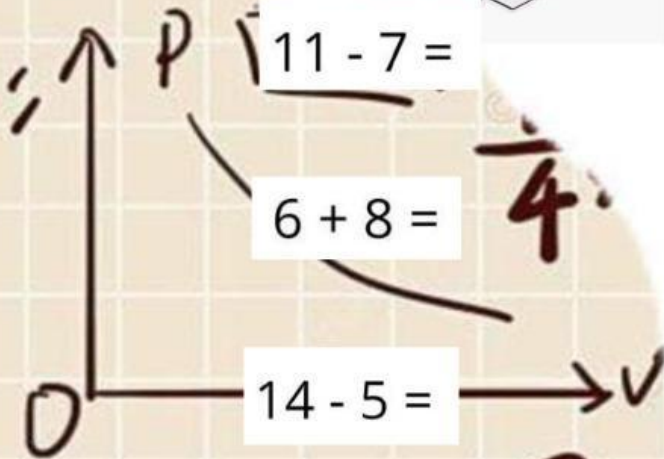
$$a + b = c$$

Penjumlahan & Pengurangan

$$b = (x)$$

9 JOIN

Buatlah garis ke jawaban yang benar



14



9



4



$b^2 \times \sqrt{2}$

$a = \lambda_1 e_1 + \lambda_2 e_2$

$x_1 y_2 - x_2 y_1 = 0$



$$a + b = (x_1 + x_2, y_1 + y_2)$$
$$a - b = (x_1 - x_2, y_1 - y_2)$$

$$\sin\left(\frac{\pi}{2} + a\right) = \cos a$$
$$\cos\left(\frac{\pi}{2} + a\right) = -\sin a$$