

Họ và tên: _____

Ngày: _____

1. Tô màu ô có số lớn nhất trong mỗi nhóm

12	17	18	14
----	----	----	----

13	15	12	11
----	----	----	----

16	19	11	17
----	----	----	----

14	12	13	15
----	----	----	----

22	27	25	28
----	----	----	----

21	29	25	22
----	----	----	----

23	25	24	21
----	----	----	----

29	22	27	25
----	----	----	----

26	30	27	24
----	----	----	----

28	23	25	21
----	----	----	----

2. Đếm ngược

1)

16	15	14		12	11		9
----	----	----	--	----	----	--	---

2)

18		16	15		13	12	
----	--	----	----	--	----	----	--

3)

20	19		17	16		14	
----	----	--	----	----	--	----	--

4)

19	18	17		15	14		12
----	----	----	--	----	----	--	----

5)

17	16		14		12		10
----	----	--	----	--	----	--	----

3. Điền dấu $>$, $<$, $=$

$7 - 2 \square 7 - 1$

$6 - 2 \square 9 - 5$

$3 + 6 \square 7 + 2$

$6 - 3 \square 4 - 1$

$8 - 3 \square 6 - 4$

$5 - 3 \square 8 - 4$

$8 - 1 \square 7 - 4$

$2 + 5 \square 5 + 3$

$2 + 8 \square 1 + 8$

4. Điền dấu + hoặc -

$6 \square 2 = 4$

$2 \square 6 = 8$

$2 = 6 \square 4$

$3 \square 2 = 5$

$4 \square 3 = 1$

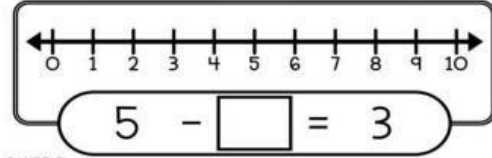
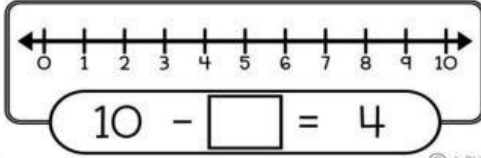
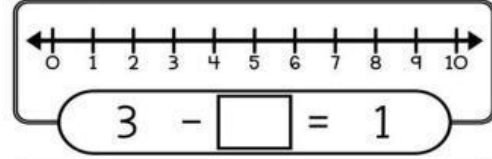
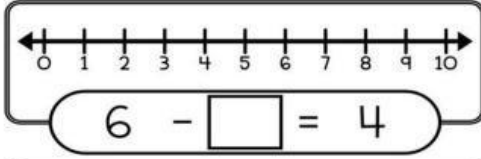
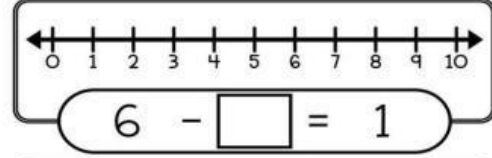
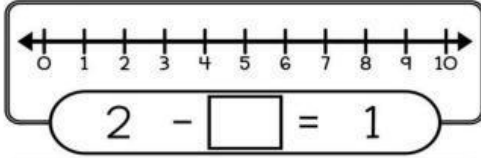
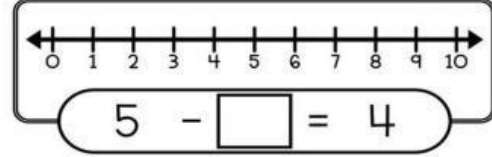
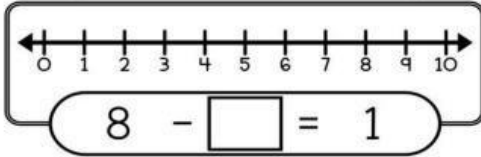
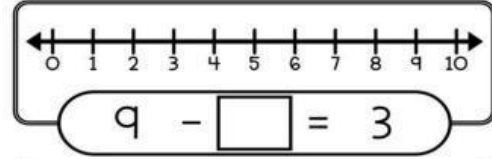
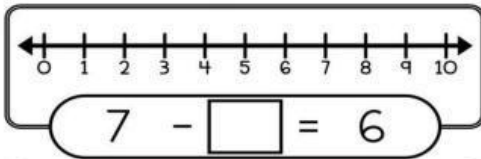
$3 = 5 \square 2$

$5 \square 1 = 4$

$6 \square 1 = 5$

$0 = 3 \square 3$

5. Điền số thích hợp



6. Đếm hình

