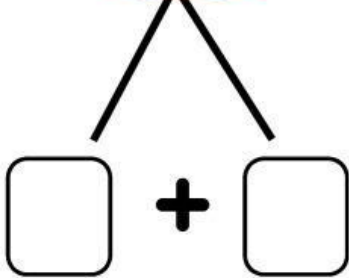


Nombre: \_\_\_\_\_

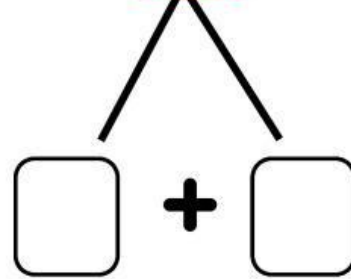
VdM

# ROMPEMOS

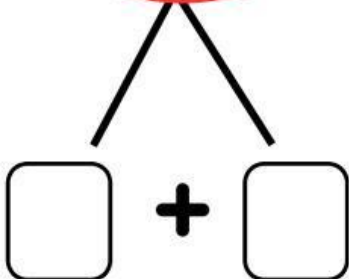

$6 - 2 = \square$



$10 - 8 = \square$



$8 - 3 = \square$



$5 - 2 = \square$

