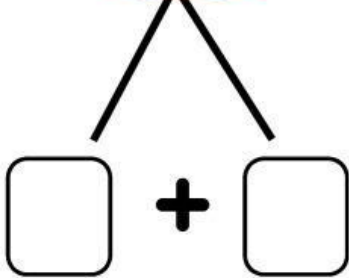


Nombre: \_\_\_\_\_

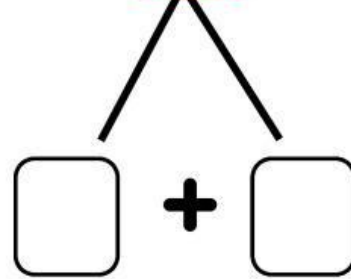
VdM

# ROMPEMOS

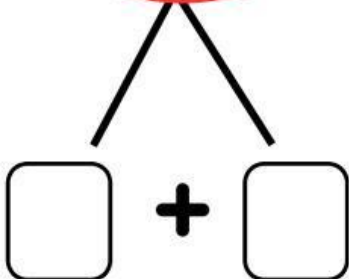

$8 - 5 = \square$



$10 - 3 = \square$



$9 - 5 = \square$



$7 - 2 = \square$

