











Name: _____

Class/No: _____

2D Geometric Shapes

Look at each shape carefully. Count the sides and corners, then write your answers in the boxes.

 <p>Triangle</p>	<p>How many sides? <input type="text"/></p> <p>How many corners? <input type="text"/></p>	 <p>Square</p>	<p>How many sides? <input type="text"/></p> <p>How many corners? <input type="text"/></p>
 <p>Pentagon</p>	<p>How many sides? <input type="text"/></p> <p>How many corners? <input type="text"/></p>	 <p>Diamond</p>	<p>How many sides? <input type="text"/></p> <p>How many corners? <input type="text"/></p>
 <p>Rectangle</p>	<p>How many sides? <input type="text"/></p> <p>How many corners? <input type="text"/></p>	 <p>Parallelogram</p>	<p>How many sides? <input type="text"/></p> <p>How many corners? <input type="text"/></p>
 <p>Trapezium</p>	<p>How many sides? <input type="text"/></p> <p>How many corners? <input type="text"/></p>	 <p>Heptagon</p>	<p>How many sides? <input type="text"/></p> <p>How many corners? <input type="text"/></p>
 <p>Circle</p>	<p>How many sides? <input type="text"/></p> <p>How many corners? <input type="text"/></p>	 <p>Hexagon</p>	<p>How many sides? <input type="text"/></p> <p>How many corners? <input type="text"/></p>