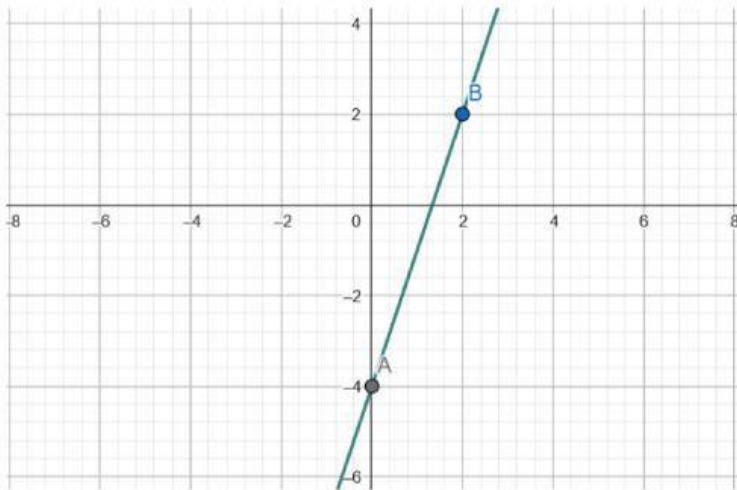


ACTIVIDAD. Determina la ecuación de una recta.

Escribe la pendiente, la ordenada en el origen y la ecuación de cada recta:



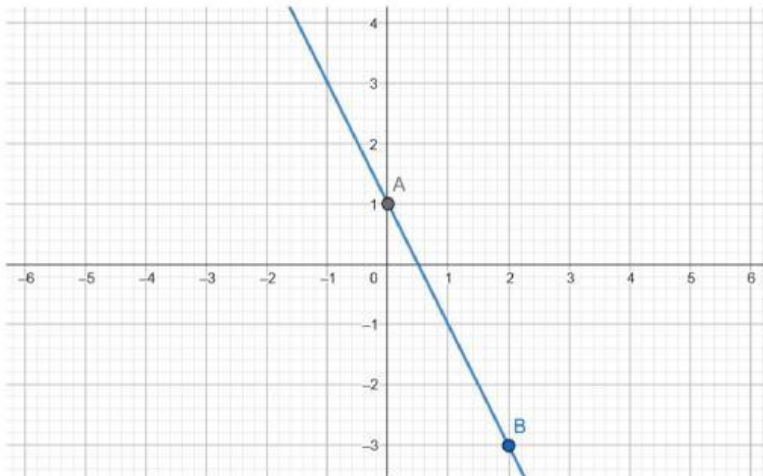
A (,)

B (,)

$m = \frac{-}{-} = \text{---}$

$n =$

$y = f(x) =$



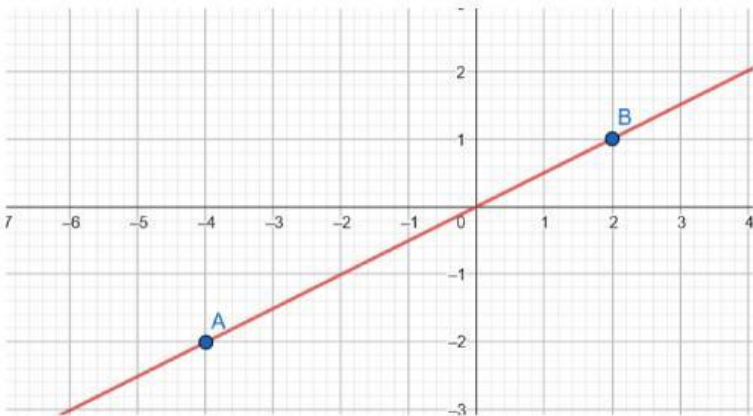
A (,)

B (,)

$m = \frac{-}{-} = \text{---} =$

$n =$

$y = f(x) =$



A (,)

B (,)

$m = \frac{-}{-} = \text{---} =$

$n =$

$y = f(x) = \text{---}$