




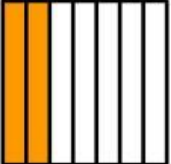


NAMA : _____

KELAS : _____

PECAHAN

Lingkari pecahan yang sesuai dengan bagian yang diarsir pada setiap bentuk dari pilihan yang tersedia.

	$\frac{1}{6}$	$\frac{3}{4}$	$\frac{2}{4}$	$\frac{3}{6}$	$\frac{2}{6}$
	$\frac{3}{5}$	$\frac{4}{5}$	$\frac{5}{6}$	$\frac{3}{5}$	$\frac{4}{6}$
	$\frac{1}{6}$	$\frac{2}{6}$	$\frac{2}{7}$	$\frac{3}{6}$	$\frac{2}{5}$
	$\frac{3}{8}$	$\frac{2}{6}$	$\frac{3}{3}$	$\frac{2}{8}$	$\frac{3}{6}$
	$\frac{6}{8}$	$\frac{5}{6}$	$\frac{6}{4}$	$\frac{5}{8}$	$\frac{4}{6}$
	$\frac{4}{8}$	$\frac{5}{7}$	$\frac{2}{8}$	$\frac{3}{7}$	$\frac{2}{7}$

NAMA : _____


KELAS : _____

MENGHUBUNGKAN PECAHAN

Hubungkan gambar pizza dengan angka pecahan yang tepat dan benar!



$$\frac{1}{3}$$



$$\frac{3}{6}$$



$$\frac{2}{10}$$



$$\frac{1}{2}$$



$$\frac{1}{9}$$



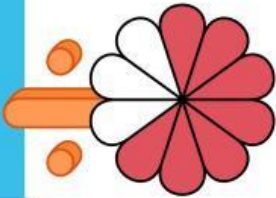
$$\frac{3}{7}$$

NAMA : _____


KELAS : _____

PENGURANGAN PECAHAN

Kerjakanlah operasi hitung pecahan berikut ini dengan tepat!




-




=

 $\frac{\square}{\square} - \frac{\square}{\square} = \frac{\square}{\square}$




-




=

 $\frac{\square}{\square} - \frac{\square}{\square} = \frac{\square}{\square}$




-




=

 $\frac{\square}{\square} - \frac{\square}{\square} = \frac{\square}{\square}$



-



=

 $\frac{\square}{\square} - \frac{\square}{\square} = \frac{\square}{\square}$

NAMA : _____

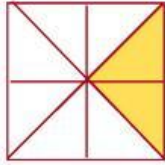
KELAS : _____

PECAHAN ARSIRAN

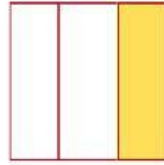
Perhatikan gambar di bawah ini kemudian
tentukan nilai pecahan yang tepat!




$\frac{\square}{\square}$



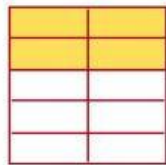
$\frac{\square}{\square}$



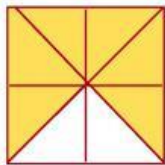
$\frac{\square}{\square}$



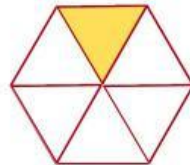
$\frac{\square}{\square}$



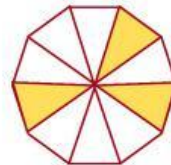
$\frac{\square}{\square}$




$\frac{\square}{\square}$



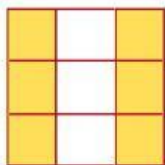
$\frac{\square}{\square}$




$\frac{\square}{\square}$




$\frac{\square}{\square}$



$\frac{\square}{\square}$



$\frac{\square}{\square}$











$\frac{\square}{\square}$









NAMA : _____

KELAS : _____

MEMBANDINGKAN PECAHAN

Amati dua gambar lingkaran pecahan. Tentukan pecahan yang lebih besar, lebih kecil atau sama dengan melihat bagian yang diarsir. Gunakan tanda perbandingan ($>$, $<$, $=$) di antara kedua pecahan tersebut.

	<input type="text"/>	
	<input type="text"/>	
	<input type="text"/>	
	<input type="text"/>	

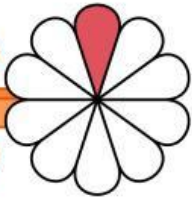

	<input type="text"/>	
	<input type="text"/>	
	<input type="text"/>	
	<input type="text"/>	



NAMA : _____



KELAS : _____



PENJUMLAHAN PECAHAN

Kerjakanlah operasi hitung pecahan berikut ini dengan tepat!

 $+$  $= \frac{\square}{\square} + \frac{\square}{\square} =$

 $+$  $= \frac{\square}{\square} + \frac{\square}{\square} =$

 $+$  $= \frac{\square}{\square} + \frac{\square}{\square} =$

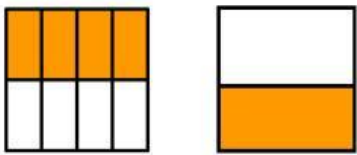
 $+$  $= \frac{\square}{\square} + \frac{\square}{\square} =$

NAMA : _____

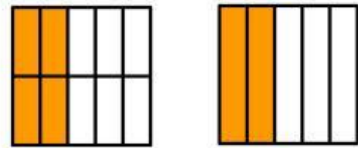
KELAS : _____

PECAHAN SENILAI

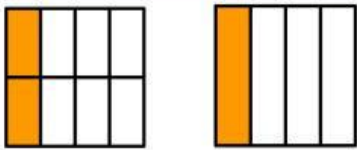
Isilah titik-titik di bawah ini dengan bilangan pecahan sesuai derah yang diarsir!



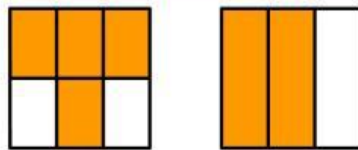
$$\frac{4}{8} = \frac{1}{2}$$



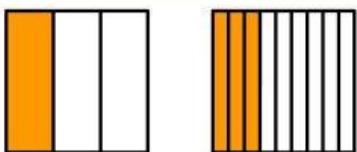
$$\frac{\square}{\square} = \frac{\square}{\square}$$



$$\frac{\square}{\square} = \frac{\square}{\square}$$



$$\frac{\square}{\square} = \frac{\square}{\square}$$



$$\frac{\square}{\square} = \frac{\square}{\square}$$

Contoh :

$\frac{4}{8}$ senilai dengan $\frac{1}{2}$ karena $\frac{4}{8}$

sama-sama dibagi 4 pada bagian penyebut dan pembilangnya.

NAMA : _____

KELAS : _____

MENGENAL PECAHAN

Tuliskan pecahan dengan menuliskan jumlah bagian yang diarsir pada kotak atas (pembilang) dan jumlah seluruh bagian pada kotak bawah (penyebut)!



$$\frac{1}{4}$$



$$\frac{\square}{\square}$$



$$\frac{\square}{\square}$$



$$\frac{\square}{\square}$$



$$\frac{\square}{\square}$$



$$\frac{\square}{\square}$$



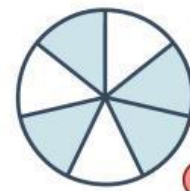
$$\frac{\square}{\square}$$



$$\frac{\square}{\square}$$



$$\frac{\square}{\square}$$



$$\frac{\square}{\square}$$



$$\frac{\square}{\square}$$



$$\frac{\square}{\square}$$



$$\frac{\square}{\square}$$