

PART A
(30 marks)

A. Circle the right answer

1. Which of the following is a living thing?




2. Which of the following is a Non-living thing?



3. A dog can _____ but a bag cannot.

- A. fly
- B. swim
- C. run

4. A tiger needs **food** and _____ to stay alive.
- A. water
 - B. sunlight
 - C. clothes



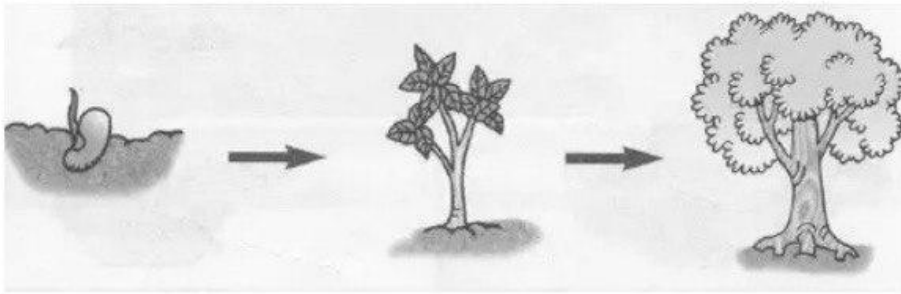
5. The caterpillar died because there is no In the glass jar.
- A. air
 - B. food
 - C. sunlight

6. The picture below show a few kind of food. Which of them can helps us to stay healthy?



7. Faisal is eight years old. The height of Faisal might be.....
- A. 30 cm
 - B. 90 cm

C. 140 cm



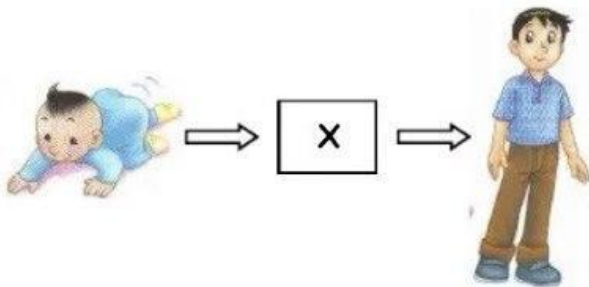
8. The picture above show that

- A. Living thing need food
- B. Living thing breathe
- C. Living thing grow

9. Which of the following statement is **false** about the diagram below?



- A. it cannot move
- B. it need food and water
- C. it can breathe



10. Which of the following pictures represent x ?

A.



<http://gudan>

B.



blogspot.com

C.



B. Write true or false to the statements below.

11. We need food and water to stay a live.

12. Humans and animals need air to breathe.

13. The rice and bread help us to grow.

14. A cow eats other animals


15. As you grow, you change in height, size and weight.

C. Thick the correct picture

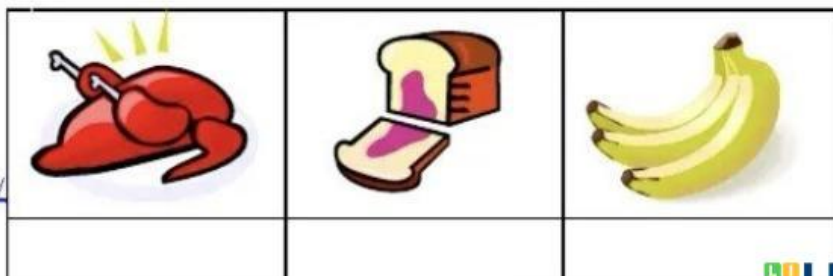
16. Living thing.



17. Thing that moves by itself.




18. Food that gives us energy.




<http://>

19. Animal that eats other animals



20. Animal that does not look like its parent.



D. Under line the correct answer

21. Duclings, kittens and chick (*look like* , *do not look like*) their parent.

22. Chair, table and book are (*living thing* , *non-living thing*).



23. Snake can (*glide* , *swim*)

24. food that give you energy (*eggs* , *bread*)



25. If we do not drink we will (*feel thirsty* , *stomach ache*)

E. Match the animals with their young.



26.





27.



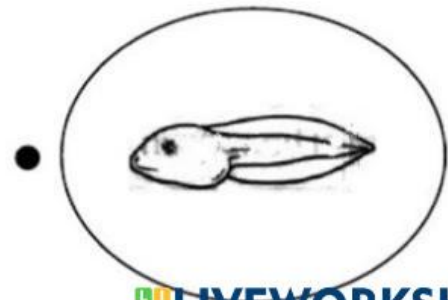
28.



29.



30.




<http://gudangsoalan.blogspot.com>

PART B
(20 mark)

Answer all the question

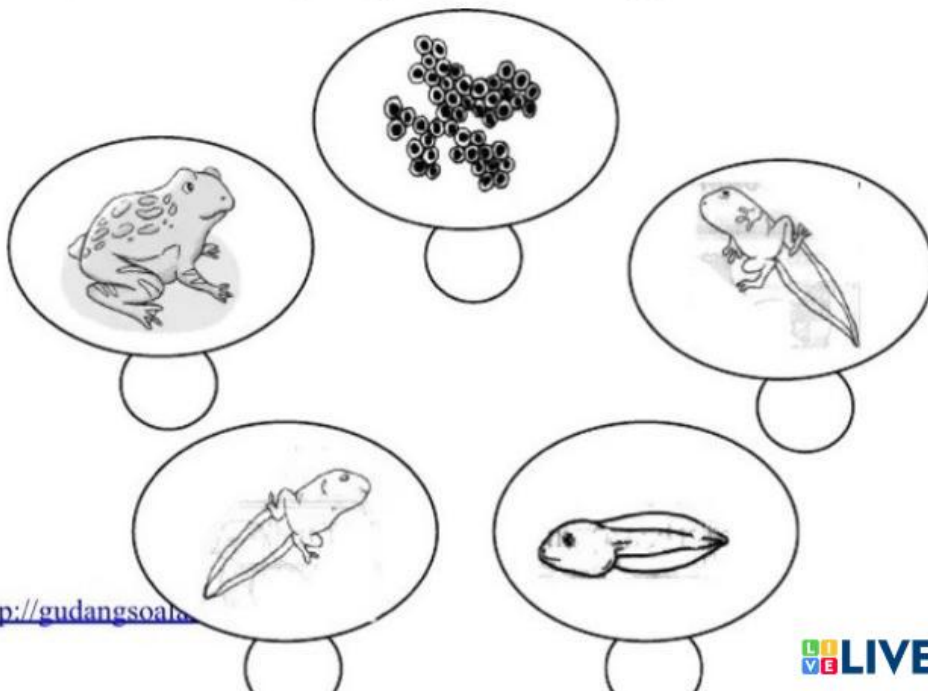
A. Fill in the blanks with the correct words

1. A baby cat is called a
2. Plant become and taller as they grow.
3. Plant, and animals are living thing.
4. A baby to become a man.
5. All animal go through a cycle called a



B. Numbers correctly

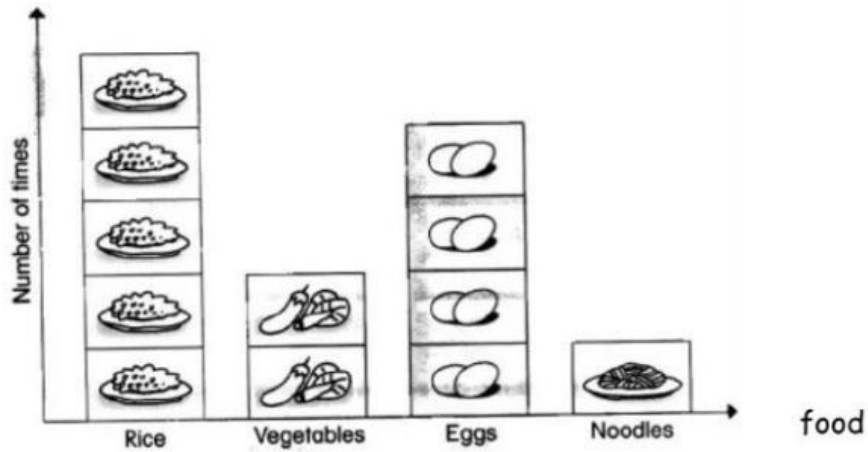
Question 6 - 10 (The growth of the frog)



(5 marks)

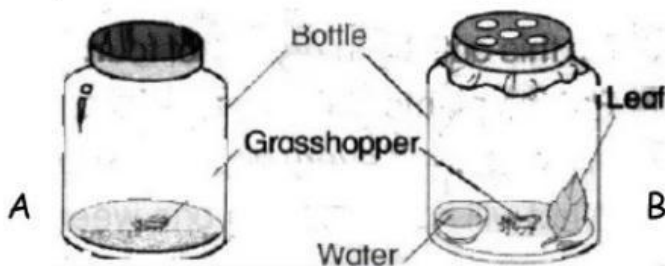
Question 11 - 15

C. The following pictograph shows what Shafura ate for breakfast over one week. Fill in the blank with the correct answer.



11. The food that is eaten most by Shafura is
12. Shafura eats rice times in the week.
13. Shafura eats vegetables..... in the week.
14. Shafura eats four times in week.
15. Shafura eats (healthy , unhealthy) breakfast.

D. Prepare the material as shown in figure 1



What will happens after three days?

What do you see?

16. Grasshopper in bottle A :

17. Grasshopper in bottle B :

18. Is the grasshopper a living thing? (Yes , No)

19. Why do you say so?
.....

20. Bottle B contains water, food and that the grasshopper
needs to stay alive.

.....