






















Name : _____

Title: _____

<u>Days of the Week</u>	<u>Number of Cookies</u>
Monday	   
Tuesday	  
Wednesday	    
Thursday	  
Friday	     

Key: cookie = 2 eaten

- How many cookies were eaten on Wednesday?
- How many cookies were eaten on Monday?
- On which day were the most cookies eaten?
- On which two days were the same amount of cookies eaten? and .
- How many more cookies were eaten on Friday than on Tuesday?