



2nd Grade Quiz

MAPS, COMPASS DIRECTIONS & GLOBES



Name: _____ Date: _____

1 What is a map?

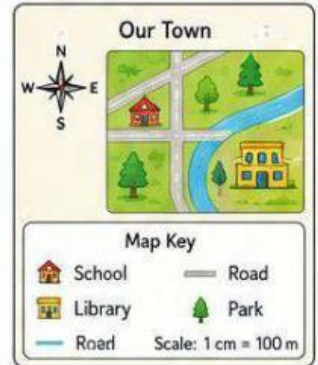
Choose the correct answer.

- (A) A picture of your family.
- (B) A drawing that shows a place from above.
- (C) A story about a place.

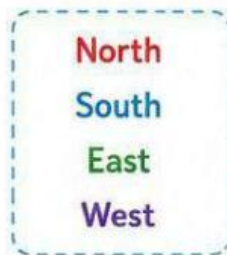
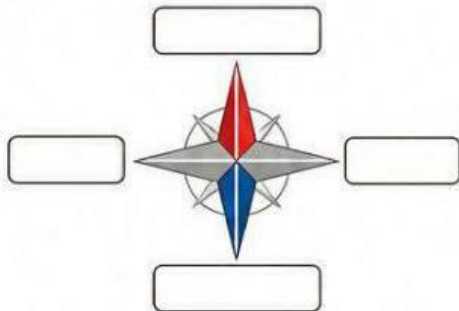


2 Which are elements (parts) of a map? Choose all that apply.

- Title
- Legend (Map Key)
- Compass Rose
- Scale
- Picture of an animal



3 Label the compass rose. Write the missing words.



4 Which statement is true?

Choose the correct answer.



- (A) The sun rises in the west.
- (B) The sun rises in the east.
- (C) The sun rises in the north.

5 Look at the map. Answer the questions.


	A	B	C	D	E
1					
2					
3					
4					
5					

1. What is at B3? _____
2. What is at D2? _____
3. What is at E3? _____
4. What is at A5? _____
5. What is at C4? _____

6 What is a globe?

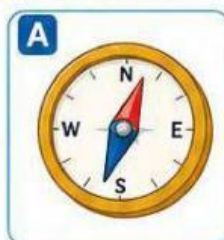
Choose the correct answer.

- (A) A flat map on paper.
- (B) A round model of the Earth.
- (C) A picture of the sky.



7 Match each description to the correct picture. Write the letter.

1. A map shows a small part of a place. _____
2. A globe shows the whole Earth. _____
3. A compass helps us know directions. _____



Great job! You are a map expert!

