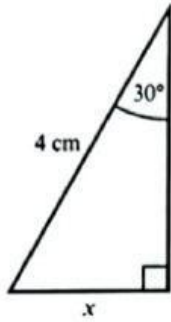




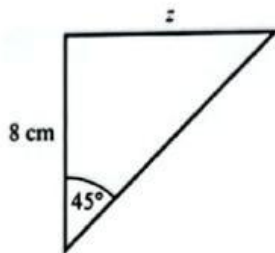
Name: _____ Class _____ Date: _____

1. Find the missing sides of the triangles below.

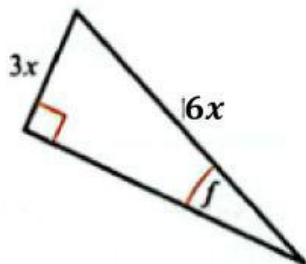
a



b



c



2. Find the area of the triangle ACD.

