



1

A school buys 8 boxes of pencils with 48 pencils in each box. They give 96 pencils to the kindergarten classes. The rest are packed equally into 9 supply bins. How many pencils go in each bin?




2

A teacher orders 12 packs of markers with 36 markers in each pack. After throwing away 54 dried-out markers, she divides the rest equally among 6 tables. How many markers does each table receive?




3

A school buys 15 boxes of notebooks with 24 notebooks in each box. They donate 120 notebooks. They are divided equally among 8 classrooms. How many notebooks does each classroom get?




4

A teacher purchases 9 cartons of glue sticks with 35 glue sticks in each carton. If 75 glue sticks are used during art week, how many are left?




5

A school orders 14 cases of folders with 28 folders in each case. 140 folders are damaged, the remaining folders are packed equally into 12 boxes. How many folders go in each box?




6

A school buys 11 boxes of crayons with 64 crayons in each box. They need to make supply kits with 45 crayons in each kit. How many full kits can they make?



7

A teacher orders 7 cartons of paper with 250 sheets in each carton. She uses 378 sheets of paper. How many sheets are left?



8

A supply closet has 9 boxes of pencils with 72 pencils in each box. If pencils are packed into groups of 50, how many complete groups can be made?

