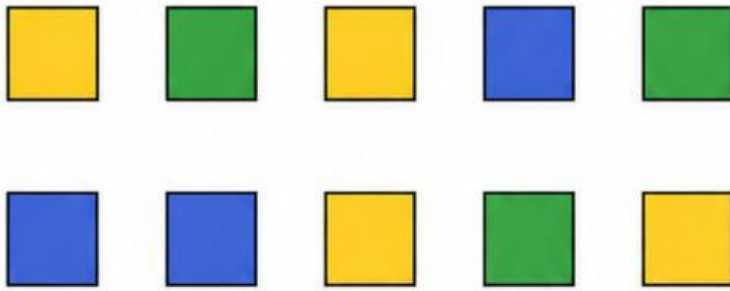


Write the **fraction** for each set of shapes.

1.




10
10
10

are yellow squares.

are green squares.

are blue squares.

2.



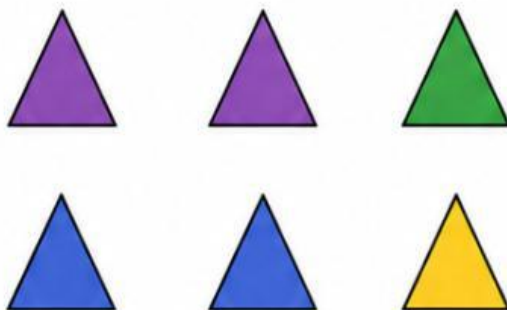
8
8
8

are red circles.

are green circles.

are yellow circles.

3.



6
6
6

are purple triangles.

are blue triangles.

are green triangles.

4.



12
12
12

are orange stars.

are blue stars.

are green stars.