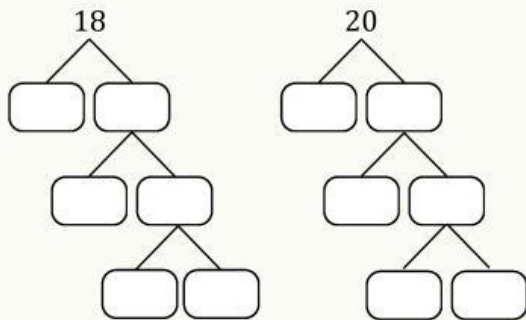


Mari Berlatih

Tentukan FPB dan KPK bilangan-bilangan di bawah ini menggunakan pohon faktor

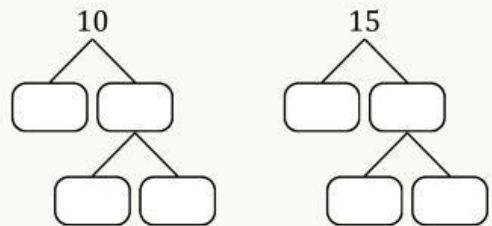
1 18 dan 20



FPB = _____

KPK = _____

4 10 dan 15



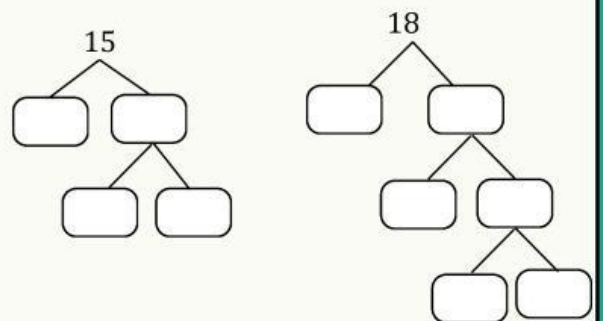
FPB = _____

KPK = _____

Seret angka tepat ke kotak kosong pada pohon faktor

| | | | |
|---|----|---|---|
| 3 | 10 | 9 | 2 |
| 2 | 3 | 3 | 5 |
| 5 | 5 | 5 | 3 |
| 1 | 2 | 5 | 2 |
| 3 | 5 | 5 | 5 |
| 1 | 3 | 3 | 1 |
| 2 | 9 | 1 | 3 |
| 1 | | 1 | |

3 15 dan 18



FPB = _____

KPK = _____