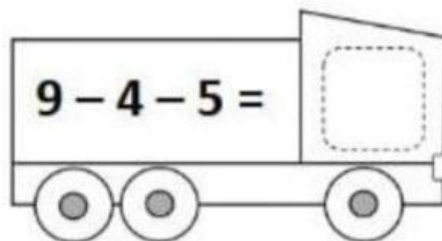
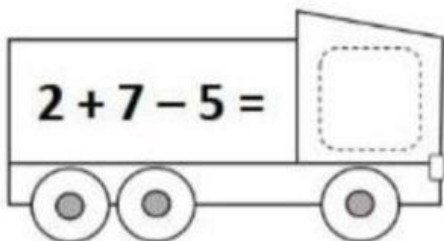
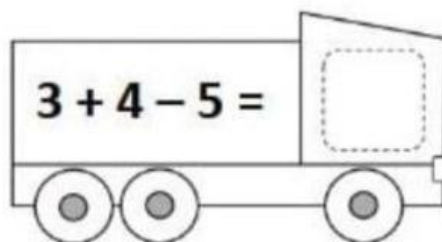
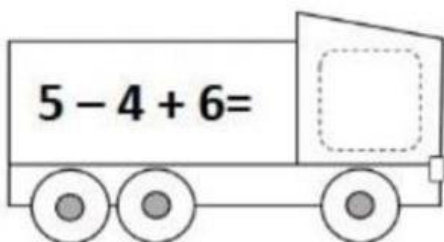
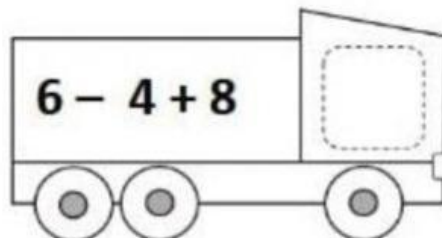
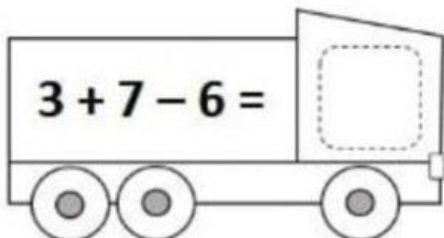
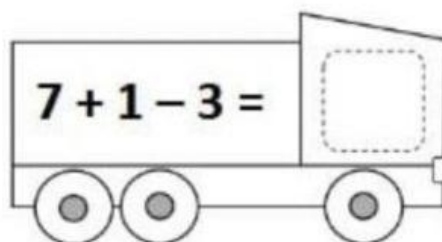
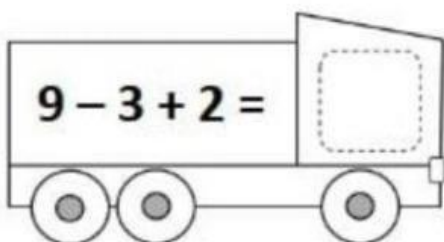
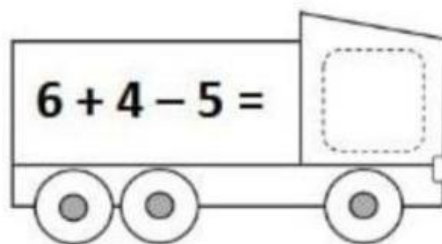
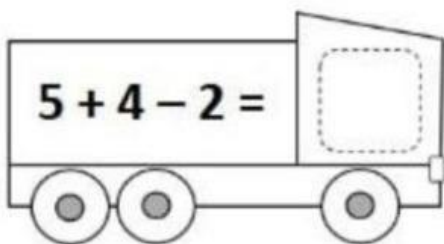


Họ và tên: _____

Ngày: _____

1 Tính lần lượt từ trái sang phải và viết kết quả vào ô trống

1. Thực hiện phép tính



2. Đếm xuôi

23			26
----	--	--	----

12			15
----	--	--	----

17			20
----	--	--	----

14			17
----	--	--	----

21			24
----	--	--	----

13			16
----	--	--	----

3. Chọn số nhỏ nhất trong mỗi nhóm

35	12	8	47
22	44	39	48
9	50	13	25
26	31	14	38
43	6	50	15