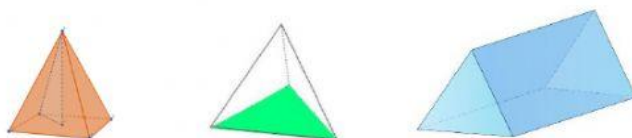


MEMBUAT SOAL LKPD LIVEWORKSHEET  
GURU INOVATIF INDONESIA

**SOAL PILIHAN GANDA**

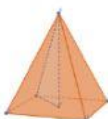
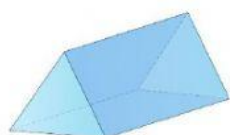
Dibawah ini yang merupakan gambar dari limas segitiga adalah....



**SOAL ISIAN SINGKAT DAN PARAGRAF**

1. Segitiga yang salah satu sudutnya  $90^\circ$  disebut dengan segitiga...
2. Teorema pythagoras adalah .....

**SOAL DROP DOWN**



**SOAL CHECK BOX**

Yang merupakan bagian dari bangun ruang sisi datar adalah:

**Kubus**

**Prisma**

**Tabung**

**Balok**

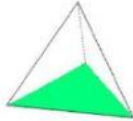
**Limas**

**Kerucut**

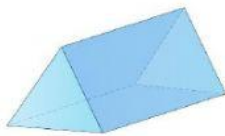
### SOAL JOIN ARROW



**PRISMA SEGITIGA**

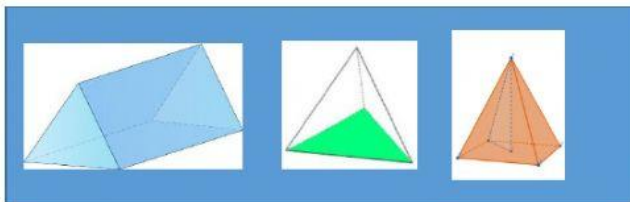


**LIMAS SEGITIGA**




**LIMAS SEGIEMPAT**


### SOAL DRAG AND DROP




PINDAJAN BANGUN RUANG DISAMPING  
KE KOTAK YANG TEPAT



**PRISMA SEGITIGA**

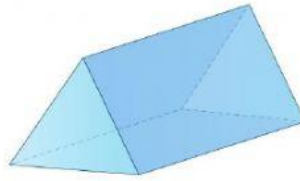
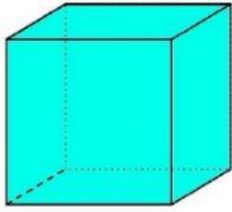


**LIMAS SEGIEMPAT**



**LIMAS SEGITIGA**

## SOAL LISTENING



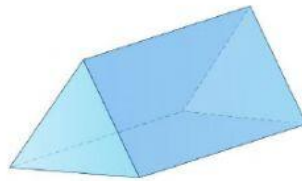
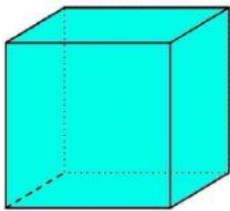
BENAR

SALAH

BENAR

SALAH

## SOAL SPEAKING



## SOAL WORD SEARCH

CARI KATA : KUBUS, BALOK, PRISMA, LIMAS

<b>A</b>	<b>K</b>	<b>U</b>	<b>B</b>	<b>U</b>	<b>S</b>	<b>P</b>	<b>O</b>
<b>Q</b>	<b>V</b>	<b>M</b>	<b>A</b>	<b>I</b>	<b>O</b>	<b>O</b>	<b>B</b>
<b>W</b>	<b>P</b>	<b>R</b>	<b>I</b>	<b>S</b>	<b>M</b>	<b>A</b>	<b>A</b>
<b>R</b>	<b>D</b>	<b>J</b>	<b>B</b>	<b>T</b>	<b>D</b>	<b>A</b>	<b>L</b>
<b>T</b>	<b>U</b>	<b>O</b>	<b>V</b>	<b>C</b>	<b>G</b>	<b>A</b>	<b>O</b>
<b>L</b>	<b>I</b>	<b>M</b>	<b>A</b>	<b>S</b>	<b>B</b>	<b>H</b>	<b>K</b>
<b>Y</b>	<b>T</b>	<b>A</b>	<b>I</b>	<b>Y</b>	<b>R</b>	<b>J</b>	<b>V</b>