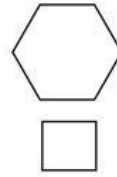
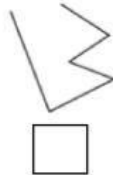
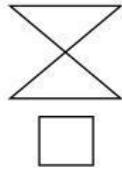
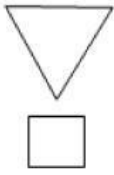


Daily test math (Ulangan math)

1. Tick [✓] to shape that include of polygon.



2. Give tick [✓] to characteristics of polygon.

- a. Open shape
- b. Close shape
- c. Straight line
- d. Do not cross line
- e. Have cross line

3. Find the missing numerator and denominator.

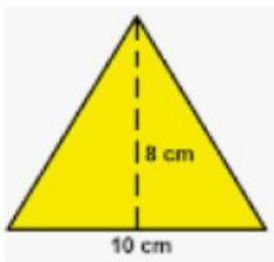
$$\frac{2}{5} = \frac{\dots}{10}$$

4. Change into decimals. $\frac{5}{2} = \dots$

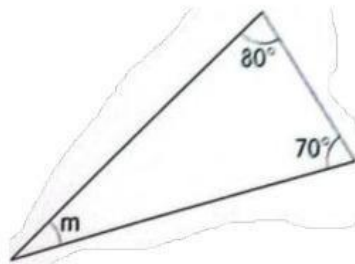
5. Change into percentage.

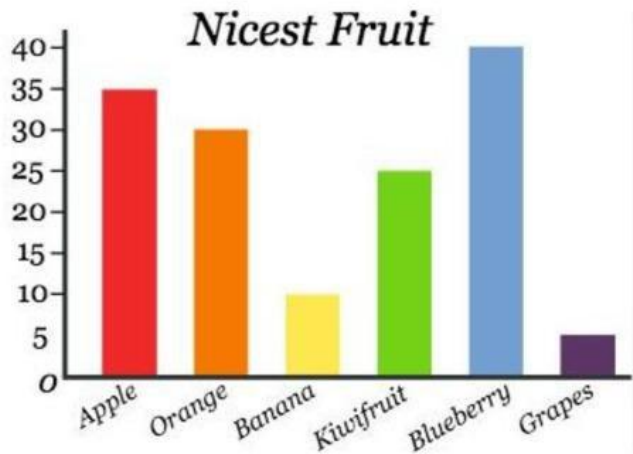
$$\frac{5}{10} = \dots$$

6. Find the area of this figure!



7. Find the $\angle m$.






8. Read the bar graph carefully. Write **yes** or **no** in the boxes.

a. 10 students like apple.

b. Blueberry is the most favorite fruits of students.

c. The lightest favorite fruits is grapes.


9. The area of a rectangle is 50 cm^2 . Its breadth is 5 cm.



Find its length!

Length =

10. Look at the figure.



Which figures have the greatest perimeter?