





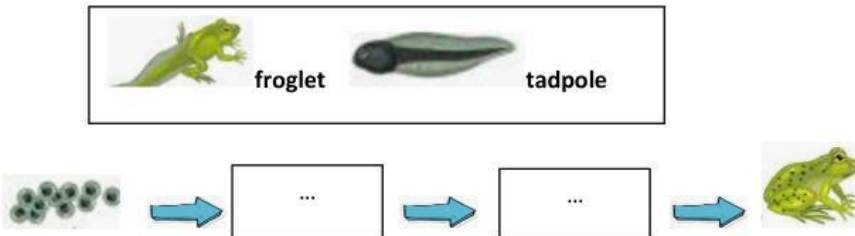
1. Match the animals and their group of vertebrate!

- a.  ● ● mammals
- b.  ● ● bird
- c.  ● ● amphibian
- d.  ● ● reptile

2. Give thick the gasses matter.



3. Choose the answer in the box to complete the life cycle of frog.



4. Classified the animals based on their reproduction.



Laying egg	Giving birth

5. Read the question and choose the answer.

This animals **can live on land and water**.

In young they breath with gills and adult they breathing using **skin and lung**.

They reproduce by laying egg. This animals include vertebrate group of

mamals

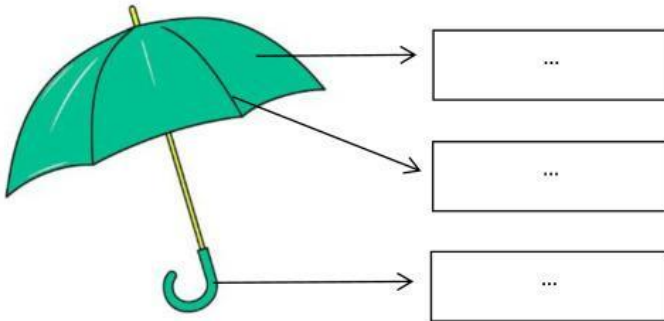
reptile

bird

amphibian

6. Complete parts of thing with the materials. Choose the answer in the box.

Metal Nylon plastic



7. Drawline the materials based on their density when in water.



Sink

Float

8. Choose the answer of mixing material.



mixing



the reaction is....

Soluble

insoluble

miscible

immiscible

9. Choose the answer in the box.

Write name the part of electricity based on their function

Battery switch bulb

Function	Parts of an electrical circuit
To on and off electric circuit.	...
Connect one electrical part to another.	wires

Produce light and heat.	...
Sources of energy.	...

10. Look at the figure.



Why does the boat can float on water?

.....