






Name: _____

Place Value: I can identify, count, and label groups of ten and one.

Count the objects. Circle groups of ten. Then write the number of tens and ones.

1.		Tens _____ Ones _____
2.		Tens _____ Ones _____
3.		Tens _____ Ones _____
4.		Tens _____ Ones _____
5.		Tens _____ Ones _____