


Name :

Class :

MULTIPLICATION AS REPEATED ADDITION

Fill in the answers with the correct numbers!

1



$$\underline{3} + \underline{3} + \underline{3} + \underline{3} = 4 \times \underline{3} = \underline{\quad}$$

4



$$\underline{\quad} + \underline{\quad} + \underline{\quad} + \underline{\quad} + \underline{\quad} = \underline{\quad} \times \underline{\quad} = \underline{\quad}$$

2



$$\underline{\quad} + \underline{\quad} + \underline{\quad} = \underline{\quad} \times \underline{\quad} = \underline{\quad}$$

5




$$\underline{\quad} + \underline{\quad} = \underline{\quad} \times \underline{\quad} = \underline{\quad}$$

3



$$\underline{\quad} + \underline{\quad} + \underline{\quad} + \underline{\quad} + \underline{\quad} + \underline{\quad} = \underline{\quad} \times \underline{\quad} = \underline{\quad}$$

6



$$\underline{\quad} + \underline{\quad} + \underline{\quad} + \underline{\quad} + \underline{\quad} + \underline{\quad} + \underline{\quad} + \underline{\quad} = \underline{\quad} \times \underline{\quad} = \underline{\quad}$$

Number:

Class:

Distribution

Look at the picture, then write the correct division and the number of parts for each child.




Writing division:

How much does each child get?



Writing division:

How much does each child get?



Writing division:

How much does each child get?



Writing division:

How much does each child get?



Writing division:

How much does each child get?



Writing division:

How much does each child get?