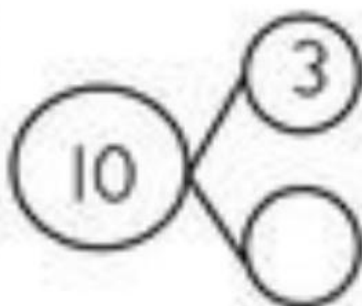


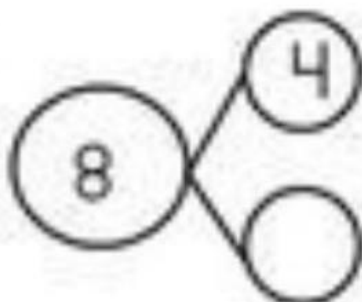
Name: \_\_\_\_\_

# Number Bonds

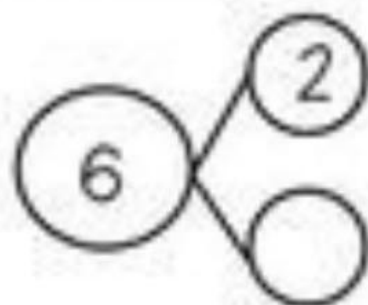
Finish the number bonds and complete the number sentences.



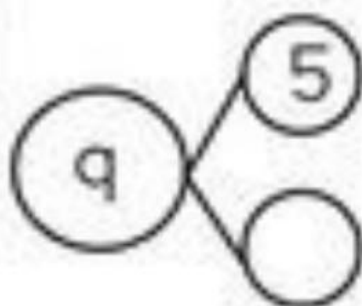

$10 - 3 = \underline{\quad}$



$8 - 4 = \underline{\quad}$



$6 - 2 = \underline{\quad}$



$9 - 5 = \underline{\quad}$

