
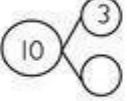

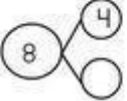

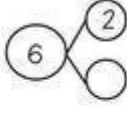


Name: _____ **Number Bonds**

Finish the number bonds and complete the number sentences.

  $10 - 3 = \underline{\quad}$

  $8 - 4 = \underline{\quad}$

  $6 - 2 = \underline{\quad}$

  $5 - 5 = \underline{\quad}$

WORKSHEETS