

Questions on Hundreds

Move the image into place. Count the number of items below according to their units.

Example:

1 Hundreds :  = 200

Tens :  = 50

screwdriver
Unit:  = 6

TOTAL : 256

2 Blue Flower
Hundreds : =

Pink Flower
Tens : =

Yellow Flower
Unit: =

TOTAL :



Questions on Hundreds

Move the image into place. Count the number of items below according to their units.

3

Pink bird
Hundreds :

=


Blue bird
Tens :

=

Owl
Unit:

=

TOTAL :



4

clown fish
Hundreds :

=


yellow fish
Tens :

=

Stingray
Unit:

=

TOTAL :



Questions on Hundreds

Move the image into place. Count the number of items below according to their units.

5 Star
Hundreds :

=


Crescent moon
Tens :

=

full moon
Unit:

=

TOTAL :



6 plate
Hundreds :

=

spoon
Tens :

=

fork
Unit:

=

TOTAL :

