

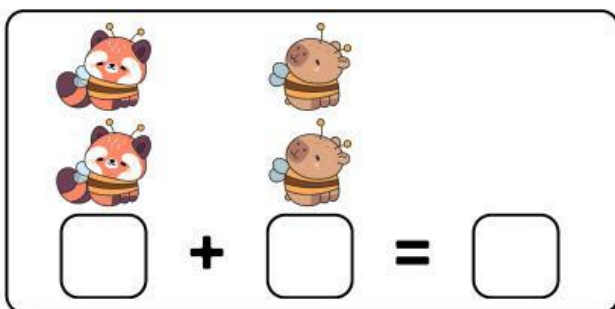



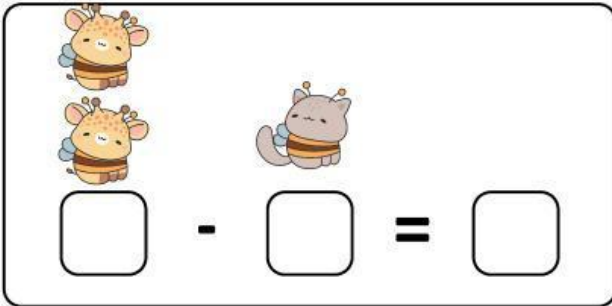
SUMAS

INSTRUCCIONES: CUENTA Y ESCRIBE LA CANTIDAD CORRECTA.



$$\square + \square = \square$$

$$\square + \square = \square$$

$$\square + \square = \square$$

$$\square + \square = \square$$

RESTAS


INSTRUCCIONES: CUENTA Y ESCRIBE LA CANTIDAD CORRECTA.




Two giraffes and one cat are shown. Below them is a subtraction equation with three empty boxes: $\square - \square = \square$.



Three pandas and one elephant are shown. Below them is a subtraction equation with three empty boxes: $\square - \square = \square$.



Three foxes and two bees are shown. Below them is a subtraction equation with three empty boxes: $\square - \square = \square$.



One duck and one frog are shown. Below them is a subtraction equation with three empty boxes: $\square - \square = \square$.