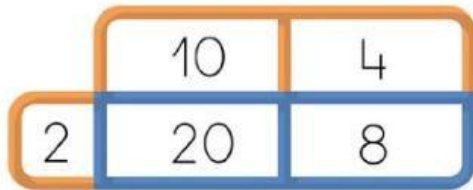
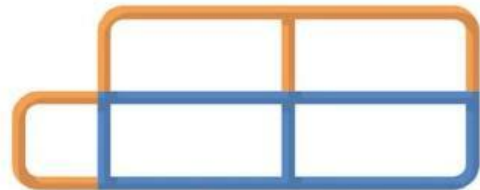


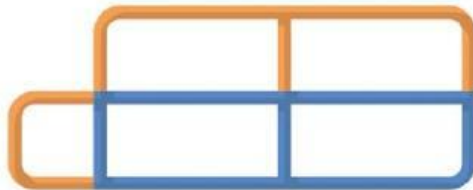
1. Calcula les multiplicacions següents (Fes servir desenes exactes)



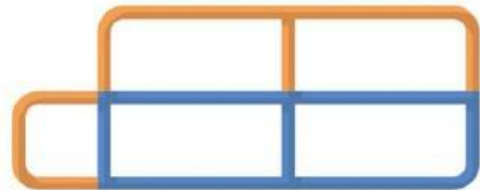
$$14 \times 2 = 28$$



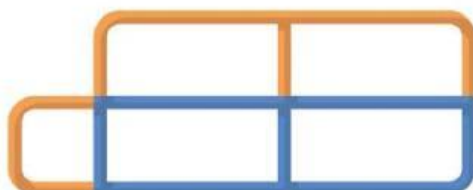
$$36 \times 2 = \dots\dots$$



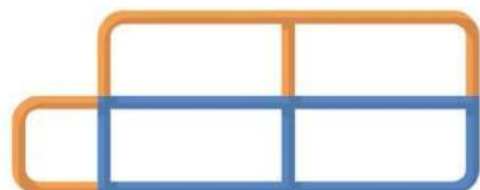
$$46 \times 2 = \dots\dots$$



$$12 \times 6 = \dots\dots$$



$$24 \times 3 = \dots\dots$$

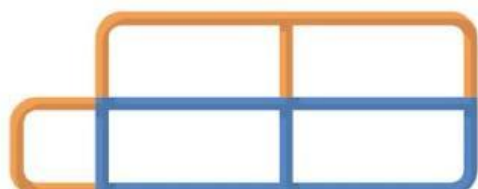


$$23 \times 4 = \dots\dots$$

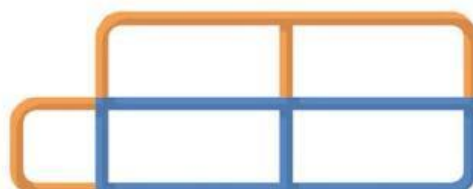
Data:



2. Calcula les multiplicacions següents (Fes servir desenes exactes)



$$13 \times 4 = \dots\dots$$



$$54 \times 3 = \dots\dots$$



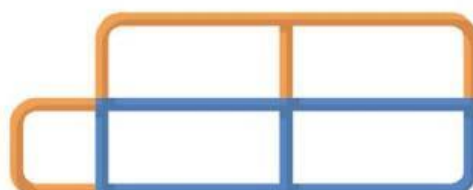
$$57 \times 6 = \dots\dots$$



$$52 \times 7 = \dots\dots$$



$$84 \times 9 = \dots\dots$$



$$94 \times 7 = \dots\dots$$