
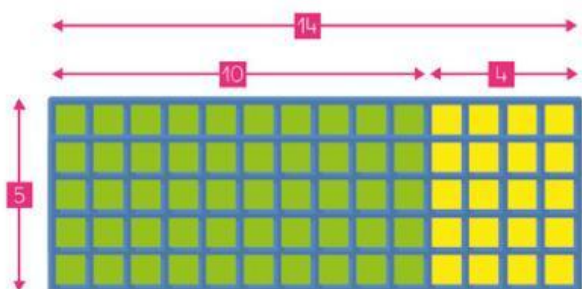


1. Respon.




- Quantes **files** hi ha?
- Quantes **columnes** hi ha?
- Quants **quadrats** hi ha **en total**?
- Completa la multiplicació: × =

2. Quants quadrats hi ha en cada cas? Completa.



$$14 \times 5 = \dots\dots$$

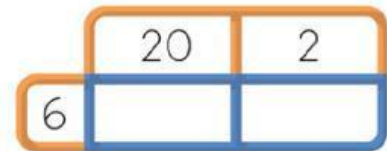
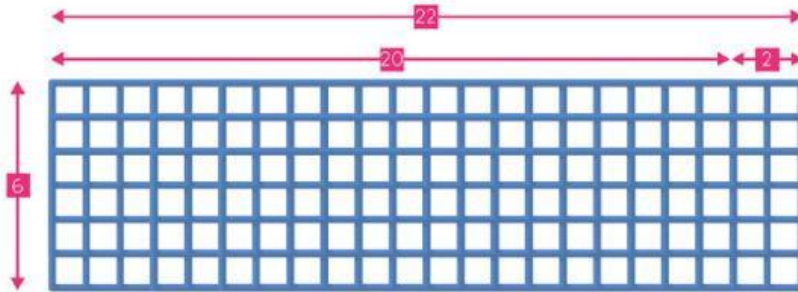
	10	4
5		



$$15 \times 5 = \dots\dots$$

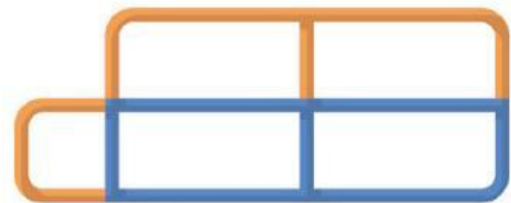

	10	5
5		

Data:




$$22 \times 6 = \dots\dots$$

3. Calcula la multiplicació 12×4 de 2 maneres diferents. Pinta el rectangle segons la descomposició que facis.



$$12 \times 4 = \dots\dots$$

$$12 = 10 + 2$$



$$12 \times 4 = \dots\dots$$

$$12 = \dots + \dots$$