

MURRUD

Kirjuta iga kujundi juurde, kui suur osa on värvitud.



$$= \frac{3}{5}$$

LUGEJA

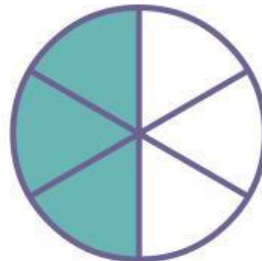
loeb, mitu osa on värvitud

NIMETAJA

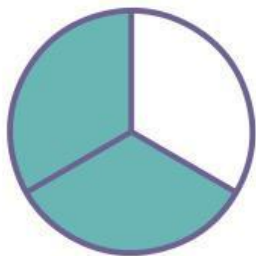
nimetab, mitu osa on kokku



$$= \frac{\quad}{\quad}$$



$$= \frac{\quad}{\quad}$$



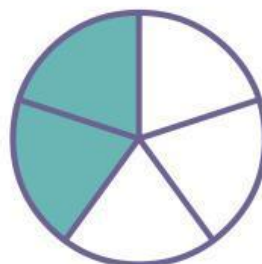
$$= \frac{\quad}{\quad}$$



$$= \frac{\quad}{\quad}$$



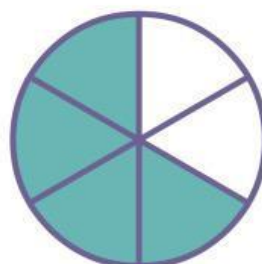
$$= \frac{\quad}{\quad}$$



$$= \frac{\quad}{\quad}$$



$$= \frac{\quad}{\quad}$$



$$= \frac{\quad}{\quad}$$