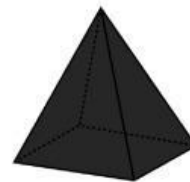
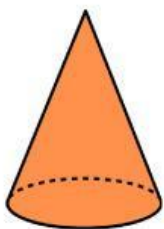

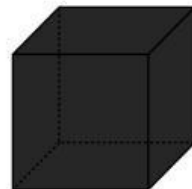
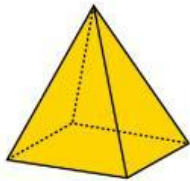
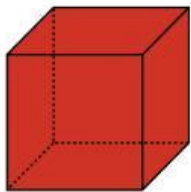


Mengenal Bangun Ruang

Tariklah garis bangun ruang di sebelah kiri sesuai dengan bayangannya di sebelah kanan!



Nama : _____

Kelas : _____