

1. عَدِّ الأشياءِ فِي البِطَاقَاتِ ثُمَّ صِلْهَا بِالعَدَدِ المُناسِبِ :

10





8



9




2. لَوِّنِ البِطَاقَاتِ الَّتِي تُمَثِّلُ العَدَدَ 10 :

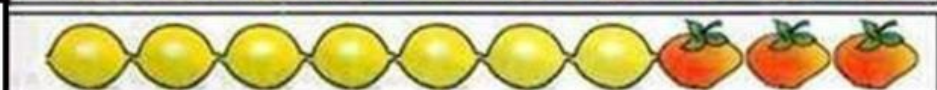


4. لَاحِظْ ثُمَّ اكْمِلْ حَسَبِ المِثَالِ :


$$6 + 4 = 10$$



$$+ = 10$$



$$+ = 10$$



$$+ = 10$$



$$+ = 10$$

