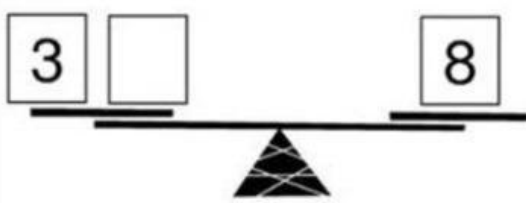
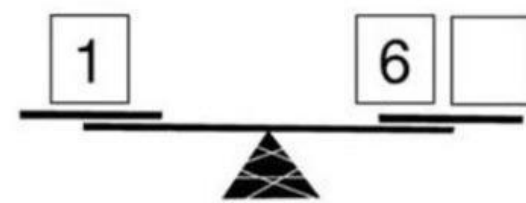
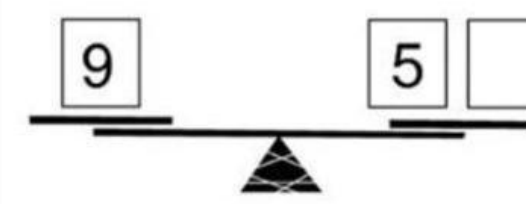
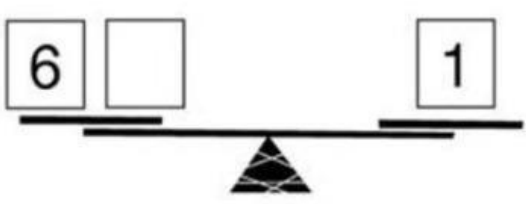
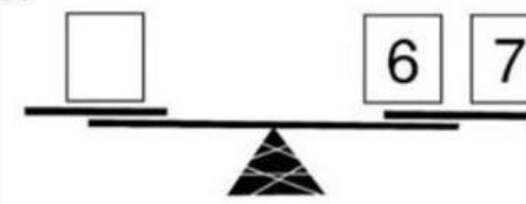
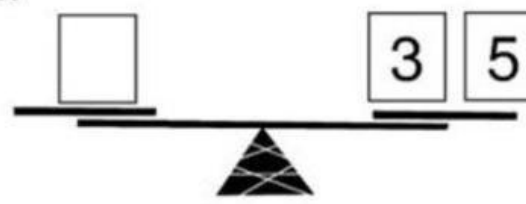
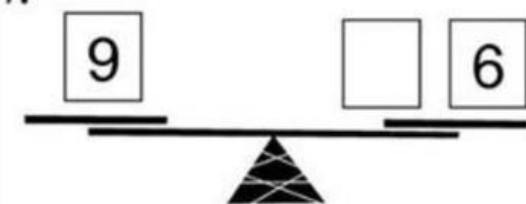
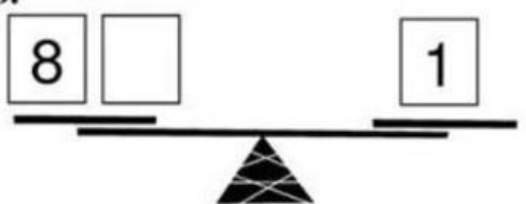


Họ và tên: _____ Ngày: _____

1. Những chiếc cân dưới đây đang ở vị trí cân bằng, hãy điền số thích hợp vào ô trống

<p>1.</p> <div style="text-align: center;">  </div> <p style="text-align: center;">_____ + _____ = _____</p>	<p>2.</p> <div style="text-align: center;">  </div> <p style="text-align: center;">_____ + _____ = _____</p>
<p>3.</p> <div style="text-align: center;">  </div> <p style="text-align: center;">_____ + _____ = _____</p>	<p>4.</p> <div style="text-align: center;">  </div> <p style="text-align: center;">_____ + _____ = _____</p>
<p>5.</p> <div style="text-align: center;">  </div>	<p>6.</p> <div style="text-align: center;">  </div>
<p>7.</p> <div style="text-align: center;">  </div>	<p>8.</p> <div style="text-align: center;">  </div>

2. Điền số còn thiếu

<input type="text"/>	+	5	=	8		<input type="text"/>	+	6	=	8
----------------------	---	---	---	---	---	----------------------	---	---	---	---

1	+	<input type="text"/>	=	6	<input type="text"/>	+	0	=	8
---	---	----------------------	---	---	----------------------	---	---	---	---

6	+	<input type="text"/>	=	8		2	+	<input type="text"/>	=	5
---	---	----------------------	---	---	--	---	---	----------------------	---	---

8	+	<input type="text"/>	=	10	8	+	<input type="text"/>	=	10
---	---	----------------------	---	----	---	---	----------------------	---	----

3	+	<input type="text"/>	=	4	<input type="text"/>	+	3	=	5
---	---	----------------------	---	---	----------------------	---	---	---	---

<input type="text"/>	+	5	=	6		<input type="text"/>	+	1	=	8
----------------------	---	---	---	---	---	----------------------	---	---	---	---