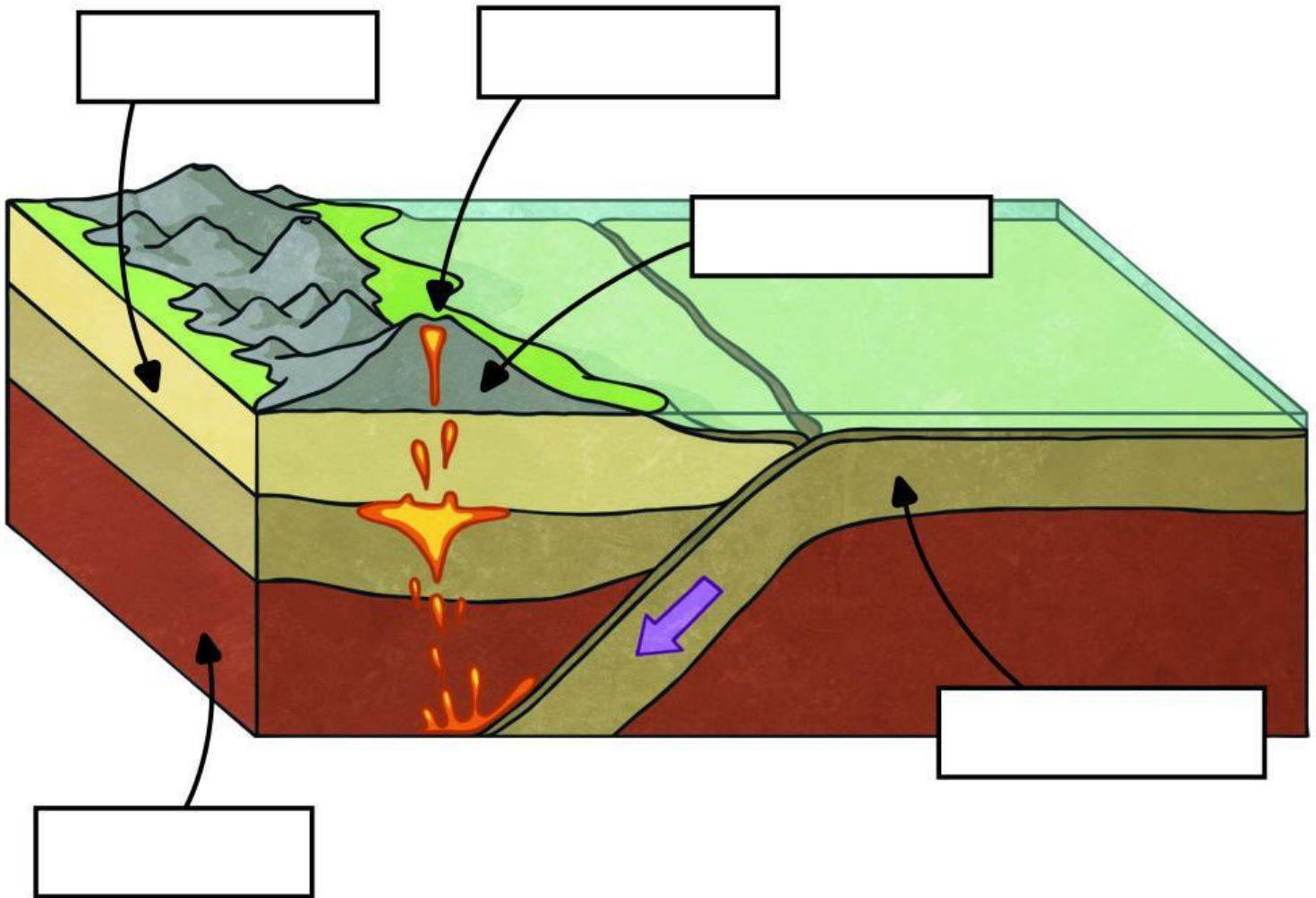


Convergent Tectonic Plates Diagram

Carefully cut out the labels and stick them in the correct boxes.



Disclaimer: To ensure the safety of the children in your setting, it is your responsibility to assess whether adult supervision or other appropriate safety measures are required when using scissors.








visit [twinkl.com](https://www.twinkl.com)



mantle	tectonic plate	magma	volcano
tectonic plate			

Write about the parts of the Tectonic Plates.

<p>mantle</p> 	<hr/> <hr/> <hr/> <hr/> <hr/> <hr/>	<p>tectonic plate</p> 	<hr/> <hr/> <hr/> <hr/> <hr/> <hr/>
<p>tectonic plate</p> 	<hr/> <hr/> <hr/> <hr/> <hr/> <hr/>	<p>magma</p> 	<hr/> <hr/> <hr/> <hr/> <hr/> <hr/>
<p>volcano</p> 	<hr/> <hr/> <hr/> <hr/> <hr/> <hr/>		<hr/> <hr/> <hr/> <hr/> <hr/> <hr/>

Tectonic Plates Answers

