

REPASO PARA LA PRUEBA

Nombre: _____

1. Completa

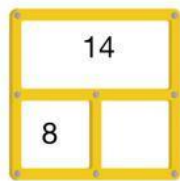
$$\boxed{3} + \text{-----} = \boxed{5} + \boxed{7}$$

$$\boxed{6} + \boxed{9} = \boxed{4} + \text{-----}$$

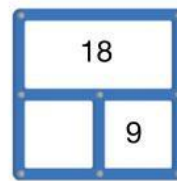
$$\text{-----} + \boxed{5} = \boxed{10} + \boxed{8}$$

$$\boxed{13} + \boxed{5} = \text{-----} + \boxed{9}$$

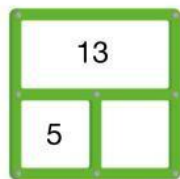
2. Completa todos los espacios en blanco



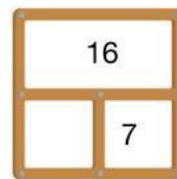
$$\boxed{14} - \boxed{8} = \text{-----}$$



$$\boxed{18} - \boxed{9} = \text{-----}$$

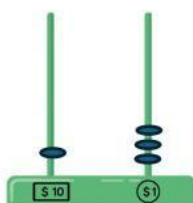


$$\boxed{\quad} - \boxed{5} = \text{-----}$$

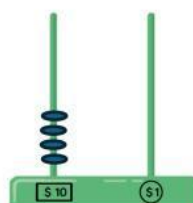


$$\boxed{\quad} - \boxed{\quad} = \text{-----}$$

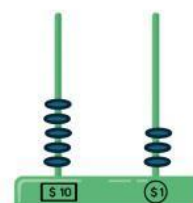
3. Marca el número que está representado en el ábaco



31 13



4 40



53 35