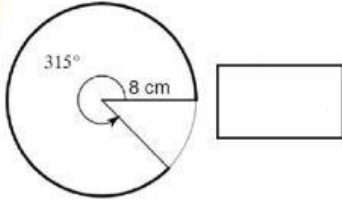


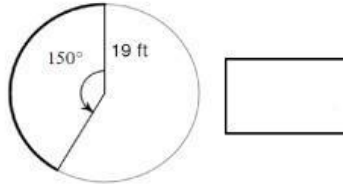
Find the length of each arc.

 Drag and  Drop

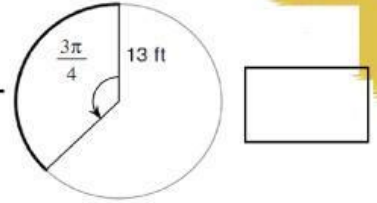
1.



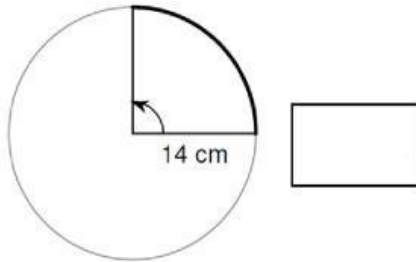
2-



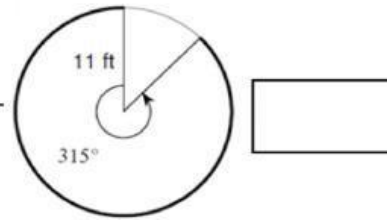
3-



4-



5-

 7π cm $\frac{95\pi}{6}$ ft 14π cm $\frac{39\pi}{4}$ ft

60.5 ft